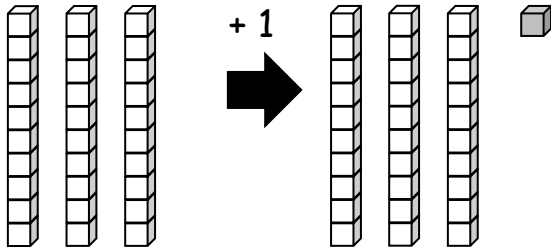


Name _____

Date _____

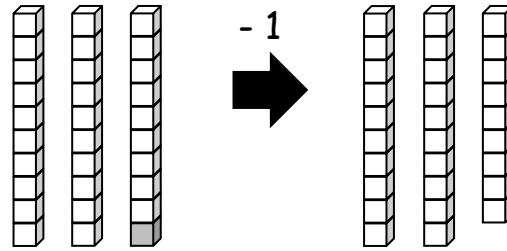
Write the number.

1.



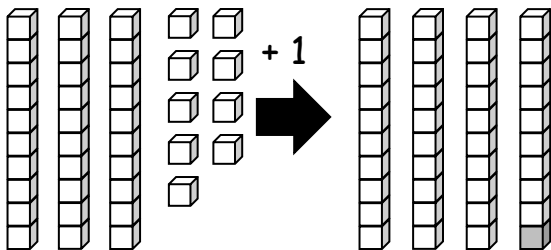
1 more than 30 is _____.

2.



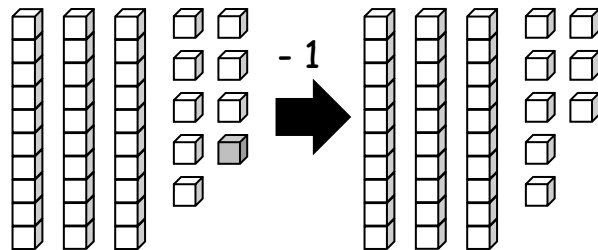
1 less than 30 is _____.

3.



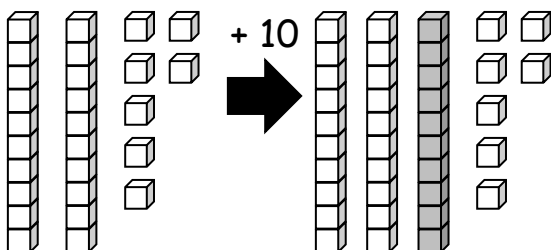
1 more than 39 is _____.

4.



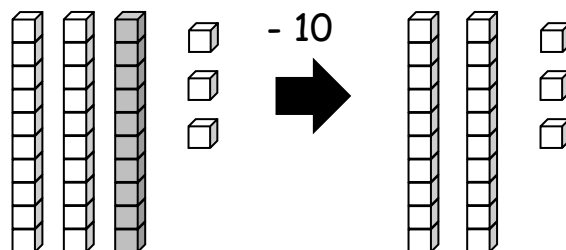
1 less than 39 is _____.

5.



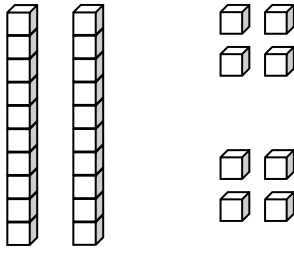
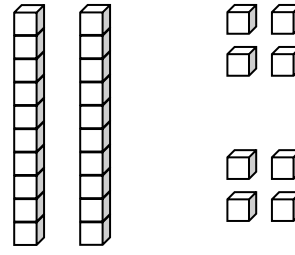
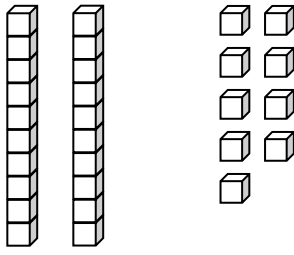
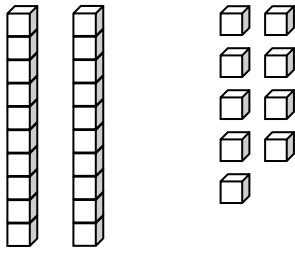
10 more than 27 is _____.

6.

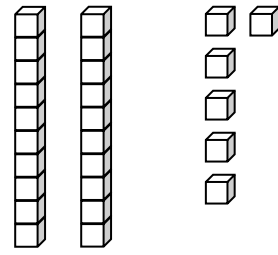
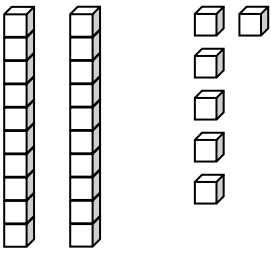
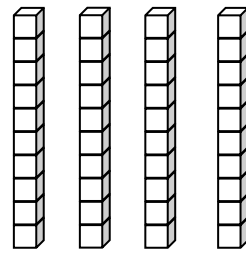
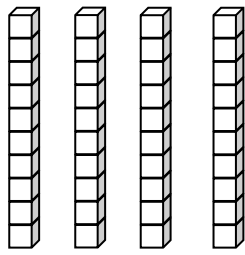


10 less than 33 is _____.

Draw 1 more or 10 more. You may use a quick ten to show 10 more.

<p>7.</p>  <p>1 more than 28 is _____.</p>	<p>8.</p>  <p>10 more than 28 is _____.</p>
<p>9.</p>  <p>1 more than 29 is _____.</p>	<p>10.</p>  <p>10 more than 29 is _____.</p>

Cross off (x) to show 1 less or 10 less.


<p>11.</p>  <p>10 less than 26 is _____.</p>	<p>12.</p>  <p>1 less than 26 is _____.</p>
<p>13.</p>  <p>10 less than 40 is _____.</p>	<p>14.</p>  <p>1 less than 40 is _____.</p>




Name _____

Date _____

Draw quick tens and ones to show the number. Then, draw 1 more or 10 more.

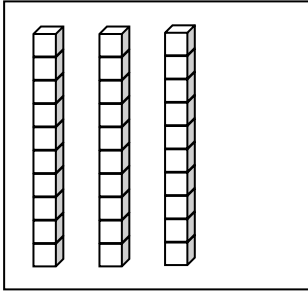
<p>1. </p> <p>1 more than 38 is <u>39</u>.</p> <p><small>30 8</small></p>	<p>2.</p> <p>10 more than 38 is _____.</p>
<p>3.</p> <p>1 more than 35 is _____.</p>	<p>4.</p> <p>10 more than 35 is _____.</p>

Draw quick tens and ones to show the number. Cross off (x) to show 1 less or 10 less.

<p>5. </p> <p>10 less than 23 is _____.</p>	<p>6.</p> <p>1 less than 23 is _____.</p>
<p>7.</p> <p>10 less than 31 is _____.</p>	<p>8.</p> <p>1 less than 31 is _____.</p>

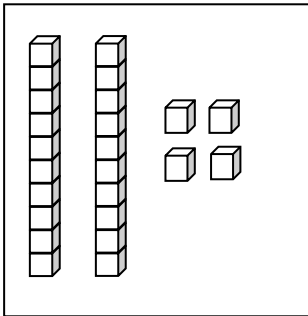
Match the words to the picture that shows the right amount.

9.



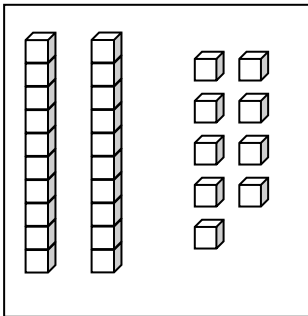
● 1 less than 30.

10.



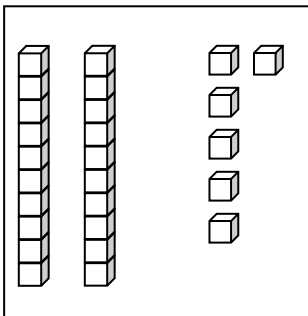
● 1 more than 23 is 24.

11.



● 10 less than 36.

12.



● 10 more than 20.



tens	ones

tens	ones

double place value charts