
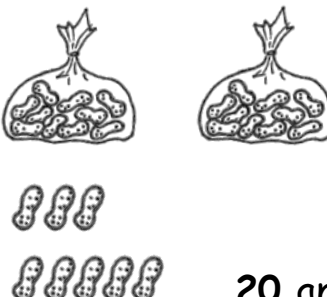
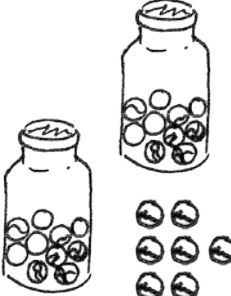
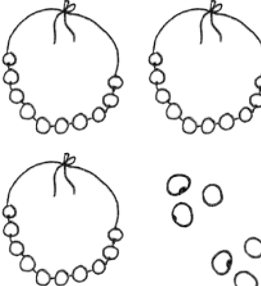






Name \_\_\_\_\_


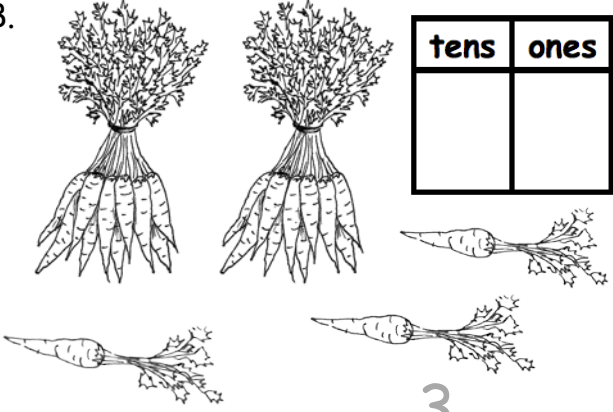
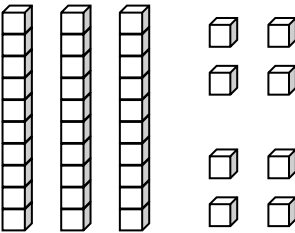
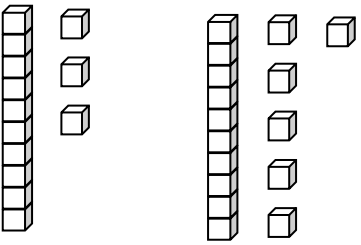
Date \_\_\_\_\_

Fill in the number bond. Complete the sentences.

|   |  |
|---|--|
| <p>1.</p>  <div><div>20</div><div>3</div><div></div></div> <p>20 and 3 make ____.</p> <p>20 + 3 = ____.</p>    | <p>2.</p>  <div><div></div><div></div><div></div></div> <p>20 and 8 make ____.</p> <p>20 + 8 = ____.</p>       |
| <p>3.</p>  <div><div></div><div></div><div></div></div> <p>20 + 7 = ____.</p> <p>7 more than 20 is ____.</p>  | <p>4.</p>  <div><div></div><div></div><div></div></div> <p>30 + 6 = ____.</p> <p>6 more than 30 is ____.</p>  |
| <p>5.</p>  <div><div></div><div></div><div></div></div> <p>5 + 20 = ____.</p> <p>20 more than 5 is ____.</p> | <p>6.</p>  <div><div></div><div></div><div></div></div> <p>8 + 30 = ____.</p> <p>30 more than 8 is ____.</p> |



Write the tens and ones. Then, write an addition sentence to add the tens and ones.

| <p>7.</p>  <table border="1"><thead><tr><th>tens</th><th>ones</th></tr></thead><tbody><tr><td>1</td><td>4</td></tr></tbody></table> <p><u>10</u> + <u>4</u> = <u>    </u></p>     | tens | ones | 1 | 4 | <p>8.</p>  <table border="1"><thead><tr><th>tens</th><th>ones</th></tr></thead><tbody><tr><td> </td><td> </td></tr></tbody></table> <p><u>    </u> + <u>3</u> = <u>    </u></p>    | tens | ones |  |  |
|--|------|------|---|---|--|------|------|--|--|
| tens   | ones |      |   |   |  |      |      |  |  |
| 1  | 4    |      |   |   |  |      |      |  |  |
| tens   | ones |      |   |   |  |      |      |  |  |
|  |      |      |   |   |  |      |      |  |  |
| <p>9.</p>  <table border="1"><thead><tr><th>tens</th><th>ones</th></tr></thead><tbody><tr><td> </td><td> </td></tr></tbody></table> <p><u>    </u> = <u>30</u> + <u>    </u></p> | tens | ones |   |   | <p>10.</p>  <table border="1"><thead><tr><th>tens</th><th>ones</th></tr></thead><tbody><tr><td> </td><td> </td></tr></tbody></table> <p><u>    </u> = <u>20</u> + <u>    </u></p> | tens | ones |  |  |
| tens   | ones |      |   |   |  |      |      |  |  |
|  |      |      |   |   |  |      |      |  |  |
| tens   | ones |      |   |   |  |      |      |  |  |
|  |      |      |   |   |  |      |      |  |  |

Match.


- |                      |          |
|----------------------|----------|
| 11. 4 tens •         | • 20 + 7 |
| 12. 2 tens 7 ones •  | • 40     |
| 13. 3 more than 20 • | • 20 + 3 |
| 14. 9 ones 3 tens •  | • 2 + 30 |
| 15. 2 ones 3 tens •  | • 9 + 30 |



Name \_\_\_\_\_

Date \_\_\_\_\_

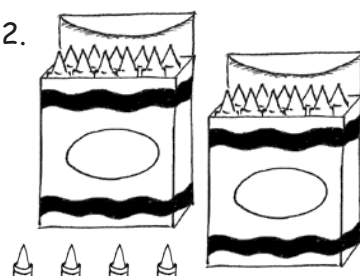
Fill in the number bond or write the tens and ones. Complete the addition sentences.

1. 

|    |   |    |
|----|---|----|
| 3  | } | 23 |
| 20 |   |    |

$3 + 20 = 23$

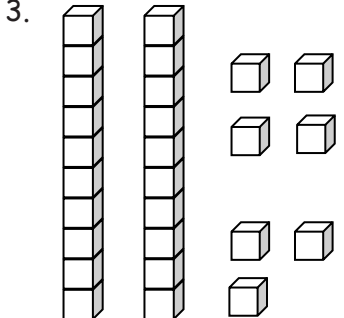
20 more than 3 is 23

2. 

|  |   |  |
|--|---|--|
|  | } |  |
|  |   |  |

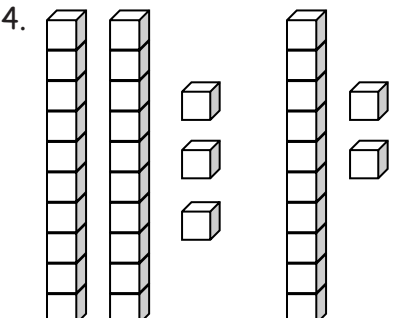
$20 + 4 = \underline{\quad}$

4 more than 20 is

3. 

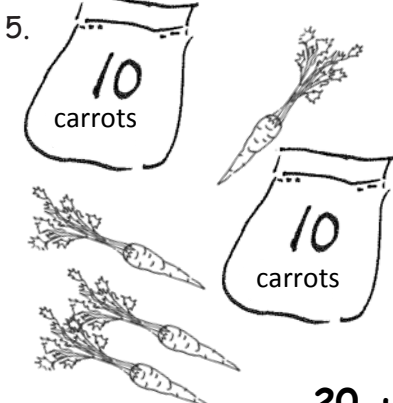
| tens | ones |
|------|------|
|      |      |

$7 + 20 = \underline{\quad}$

4. 

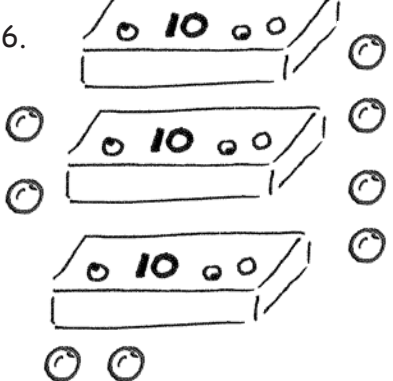
| tens | ones |
|------|------|
|      |      |

$\underline{\quad} + 30 = \underline{\quad}$

5. 

| tens | ones |
|------|------|
|      |      |

$20 + \underline{\quad} = \underline{\quad}$

6. 


| tens | ones |
|------|------|
|      |      |

$\underline{\quad} + \underline{\quad} = \underline{\quad}$



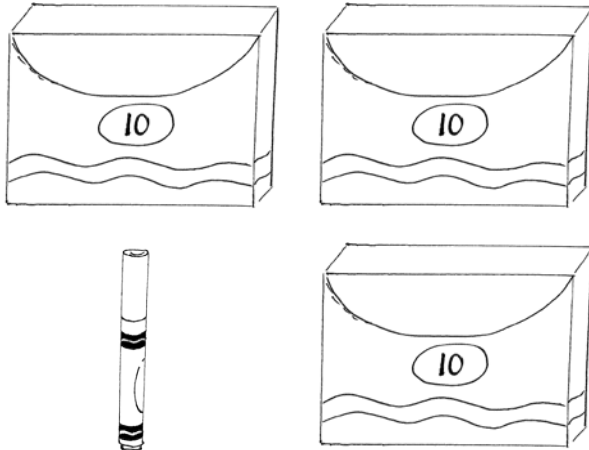
Match the pictures with the words.

7.




1 and 30 make \_\_\_\_\_.

8.



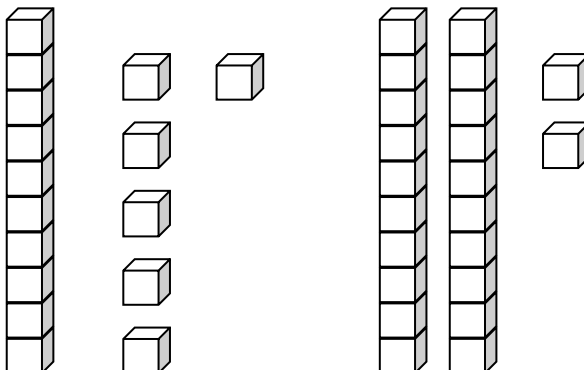
8 + 30 = \_\_\_\_\_.

9.



2 more than 10 is 12.

10.



20 + 4 = \_\_\_\_\_.