




Name \_\_\_\_\_

Date \_\_\_\_\_

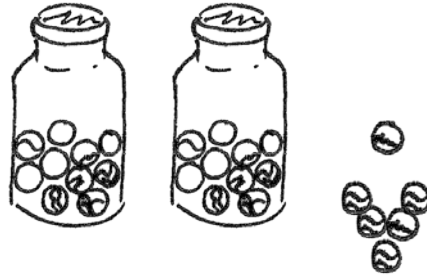
Write the tens and ones and say the numbers. Complete the statement.

1.



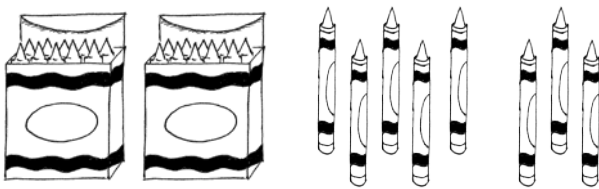
17 = \_\_\_\_ ten \_\_\_\_ ones

2.



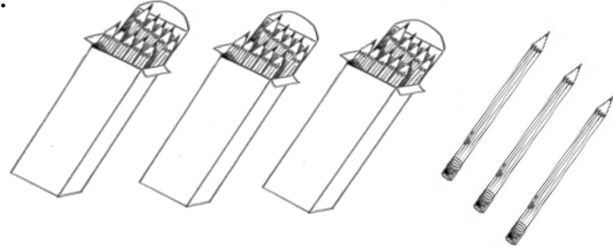
26 = \_\_\_\_ tens \_\_\_\_ ones

3.




28 = \_\_\_\_ tens \_\_\_\_ ones

4.



\_\_\_\_ tens \_\_\_\_ ones = 33


5.



tens	ones

There are \_\_\_\_ balloons.

6.



tens	ones

There are \_\_\_\_ flowers.

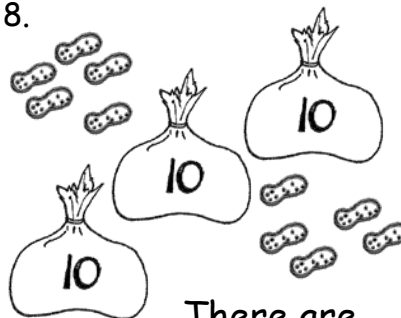
7.



tens	ones

There are \_\_\_\_ marbles.

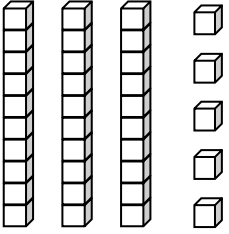
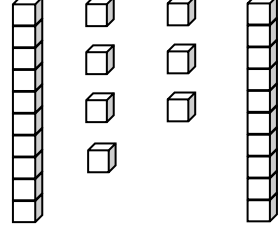
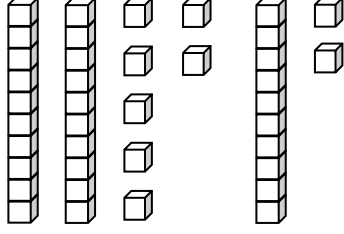
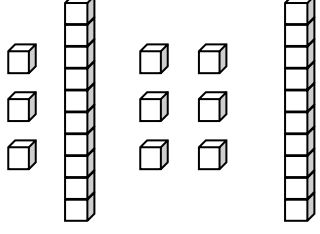
8.



tens	ones

There are \_\_\_\_ peanuts.

Write the tens and ones. Complete the statement.

<p>9.</p>  <table border="1" style="margin-left: auto; margin-right: auto; text-align: center;"> <thead> <tr> <th style="padding: 2px 10px;">tens</th> <th style="padding: 2px 10px;">ones</th> </tr> </thead> <tbody> <tr> <td style="height: 40px;"></td> <td style="height: 40px;"></td> </tr> </tbody> </table> <p style="text-align: center;">There are _____ cubes.</p>	tens	ones			<p>10.</p>  <table border="1" style="margin-left: auto; margin-right: auto; text-align: center;"> <thead> <tr> <th style="padding: 2px 10px;">tens</th> <th style="padding: 2px 10px;">ones</th> </tr> </thead> <tbody> <tr> <td style="height: 40px;"></td> <td style="height: 40px;"></td> </tr> </tbody> </table> <p style="text-align: center;">There are _____ cubes.</p>	tens	ones		
tens	ones								
tens	ones								
<p>11.</p>  <table border="1" style="margin-left: auto; margin-right: auto; text-align: center;"> <thead> <tr> <th style="padding: 2px 10px;">tens</th> <th style="padding: 2px 10px;">ones</th> </tr> </thead> <tbody> <tr> <td style="height: 40px;"></td> <td style="height: 40px;"></td> </tr> </tbody> </table> <p style="text-align: center;">There are _____ cubes.</p>	tens	ones			<p>12.</p>  <table border="1" style="margin-left: auto; margin-right: auto; text-align: center;"> <thead> <tr> <th style="padding: 2px 10px;">tens</th> <th style="padding: 2px 10px;">ones</th> </tr> </thead> <tbody> <tr> <td style="height: 40px;"></td> <td style="height: 40px;"></td> </tr> </tbody> </table> <p style="text-align: center;">There are _____ cubes.</p>	tens	ones		
tens	ones								
tens	ones								

Write the missing numbers. Say them the regular way and the Say Ten Way.

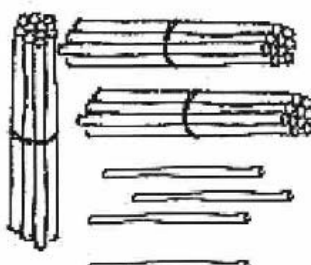
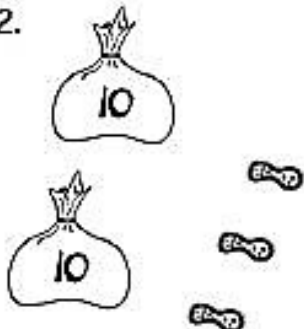

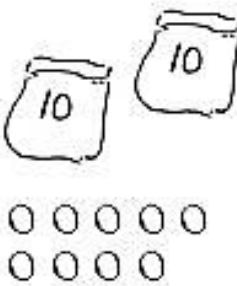
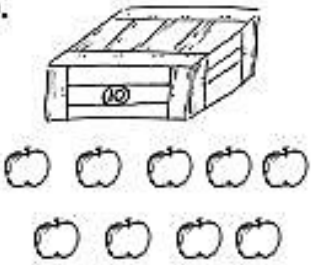

<p>13.</p> <table border="1" style="margin-left: auto; margin-right: auto; text-align: center;"> <thead> <tr> <th style="padding: 2px 10px;">tens</th> <th style="padding: 2px 10px;">ones</th> </tr> </thead> <tbody> <tr> <td style="height: 40px;"></td> <td style="height: 40px;"></td> </tr> </tbody> </table> <div style="display: inline-block; vertical-align: middle; text-align: center;"> <div style="margin-left: 10px;"> <p style="font-size: 2em;">35</p> <p>_____</p> </div> </div>	tens	ones			<p>14.</p> <table border="1" style="margin-left: auto; margin-right: auto; text-align: center;"> <thead> <tr> <th style="padding: 2px 10px;">tens</th> <th style="padding: 2px 10px;">ones</th> </tr> </thead> <tbody> <tr> <td style="padding: 10px;">2</td> <td style="padding: 10px;">7</td> </tr> </tbody> </table> <div style="display: inline-block; vertical-align: middle; text-align: center;"> <div style="margin-left: 10px;"> <p>_____</p> </div> </div>	tens	ones	2	7
tens	ones								
tens	ones								
2	7								
<p>15.</p> <table border="1" style="margin-left: auto; margin-right: auto; text-align: center;"> <thead> <tr> <th style="padding: 2px 10px;">tens</th> <th style="padding: 2px 10px;">ones</th> </tr> </thead> <tbody> <tr> <td style="padding: 10px;">3</td> <td style="padding: 10px;">9</td> </tr> </tbody> </table> <div style="display: inline-block; vertical-align: middle; text-align: center;"> <div style="margin-left: 10px;"> <p>_____</p> </div> </div>	tens	ones	3	9	<p>16.</p> <table border="1" style="margin-left: auto; margin-right: auto; text-align: center;"> <thead> <tr> <th style="padding: 2px 10px;">tens</th> <th style="padding: 2px 10px;">ones</th> </tr> </thead> <tbody> <tr> <td style="height: 40px;"></td> <td style="height: 40px;"></td> </tr> </tbody> </table> <div style="display: inline-block; vertical-align: middle; text-align: center;"> <div style="margin-left: 10px;"> <p style="font-size: 2em;">29</p> <p>_____</p> </div> </div>	tens	ones		
tens	ones								
3	9								
tens	ones								
<p>17.</p> <table border="1" style="margin-left: auto; margin-right: auto; text-align: center;"> <thead> <tr> <th style="padding: 2px 10px;">tens</th> <th style="padding: 2px 10px;">ones</th> </tr> </thead> <tbody> <tr> <td style="height: 40px;"></td> <td style="padding: 10px;">0</td> </tr> </tbody> </table> <div style="display: inline-block; vertical-align: middle; text-align: center;"> <div style="margin-left: 10px;"> <p style="font-size: 2em;">40</p> <p>_____</p> </div> </div>	tens	ones		0	<p>18.</p> <table border="1" style="margin-left: auto; margin-right: auto; text-align: center;"> <thead> <tr> <th style="padding: 2px 10px;">tens</th> <th style="padding: 2px 10px;">ones</th> </tr> </thead> <tbody> <tr> <td style="height: 40px;"></td> <td style="height: 40px;"></td> </tr> </tbody> </table> <div style="display: inline-block; vertical-align: middle; text-align: center;"> <div style="margin-left: 10px;"> <p style="font-size: 2em;">9</p> <p>_____</p> </div> </div>	tens	ones		
tens	ones								
	0								
tens	ones								



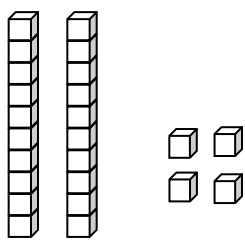
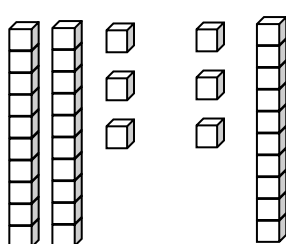
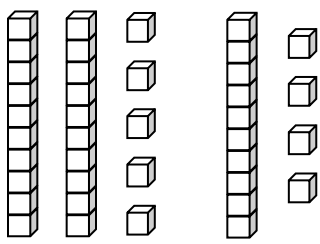
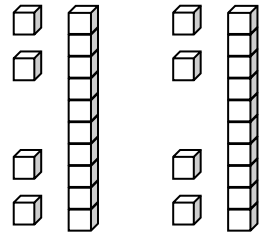
Name \_\_\_\_\_

Date \_\_\_\_\_

Write the tens and ones and complete the statement.

<p>1. </p> <table border="1" data-bbox="492 426 735 678"><thead><tr><th>tens</th><th>ones</th></tr></thead><tbody><tr><td>3</td><td>4</td></tr></tbody></table> <p>3 tens + 4 ones 30 + 4</p> <p>There are <u>34</u> straws.</p>	tens	ones	3	4	<p>2. </p> <table border="1" data-bbox="1144 426 1388 678"><thead><tr><th>tens</th><th>ones</th></tr></thead><tbody><tr><td></td><td></td></tr></tbody></table> <p>There are _____ peanuts.</p>	tens	ones		
tens	ones								
3	4								
tens	ones								
<p>3. </p> <table border="1" data-bbox="492 930 735 1182"><thead><tr><th>tens</th><th>ones</th></tr></thead><tbody><tr><td></td><td></td></tr></tbody></table> <p>There are _____ strawberries.</p>	tens	ones			<p>4. </p> <table border="1" data-bbox="1144 930 1388 1182"><thead><tr><th>tens</th><th>ones</th></tr></thead><tbody><tr><td></td><td></td></tr></tbody></table> <p>There are _____ beads.</p>	tens	ones		
tens	ones								
tens	ones								
<p>5. </p> <table border="1" data-bbox="492 1419 735 1671"><thead><tr><th>tens</th><th>ones</th></tr></thead><tbody><tr><td></td><td></td></tr></tbody></table> <p>There are _____ apples.</p>	tens	ones			<p>6. </p> <table border="1" data-bbox="1144 1419 1388 1671"><thead><tr><th>tens</th><th>ones</th></tr></thead><tbody><tr><td></td><td></td></tr></tbody></table> <p>There are _____ carrots.</p>	tens	ones		
tens	ones								
tens	ones								

Write the tens and ones. Complete the statement.

<p>7.</p>  <table border="1" style="float: right; margin-left: 20px;"> <thead> <tr> <th style="padding: 2px;">tens</th> <th style="padding: 2px;">ones</th> </tr> </thead> <tbody> <tr> <td style="height: 40px;"></td> <td style="height: 40px;"></td> </tr> </tbody> </table> <p style="text-align: center;">There are _____ cubes.</p>	tens	ones			<p>8.</p>  <table border="1" style="float: right; margin-left: 20px;"> <thead> <tr> <th style="padding: 2px;">tens</th> <th style="padding: 2px;">ones</th> </tr> </thead> <tbody> <tr> <td style="height: 40px;"></td> <td style="height: 40px;"></td> </tr> </tbody> </table> <p style="text-align: center;">There are _____ cubes.</p>	tens	ones		
tens	ones								
tens	ones								
<p>9.</p>  <table border="1" style="float: right; margin-left: 20px;"> <thead> <tr> <th style="padding: 2px;">tens</th> <th style="padding: 2px;">ones</th> </tr> </thead> <tbody> <tr> <td style="height: 40px;"></td> <td style="height: 40px;"></td> </tr> </tbody> </table> <p style="text-align: center;">There are _____ cubes.</p>	tens	ones			<p>10.</p>  <table border="1" style="float: right; margin-left: 20px;"> <thead> <tr> <th style="padding: 2px;">tens</th> <th style="padding: 2px;">ones</th> </tr> </thead> <tbody> <tr> <td style="height: 40px;"></td> <td style="height: 40px;"></td> </tr> </tbody> </table> <p style="text-align: center;">There are _____ cubes.</p>	tens	ones		
tens	ones								
tens	ones								

Write the missing numbers. Say them the regular way and the Say Ten Way.

<p>11.</p> <div style="border: 1px solid black; border-radius: 10px; padding: 5px; width: fit-content;"> <p>Regular way: "23!"</p> <p>Say Ten way: "2 ten, 3!"</p> </div> <table border="1" style="float: right; margin-left: 20px;"> <thead> <tr> <th style="padding: 2px;">tens</th> <th style="padding: 2px;">ones</th> </tr> </thead> <tbody> <tr> <td style="height: 40px;"></td> <td style="height: 40px;"></td> </tr> </tbody> </table> <div style="text-align: center; margin-top: 10px;"> <span style="font-size: 2em; margin: 0 10px;">23</span> <span style="border-bottom: 1px solid black; display: inline-block; width: 50px;"></span> </div>	tens	ones			<p>12.</p> <table border="1" style="float: right; margin-left: 20px;"> <thead> <tr> <th style="padding: 2px;">tens</th> <th style="padding: 2px;">ones</th> </tr> </thead> <tbody> <tr> <td style="text-align: center; vertical-align: middle;">3</td> <td style="text-align: center; vertical-align: middle;">2</td> </tr> </tbody> </table> <div style="text-align: center; margin-top: 10px;"> <span style="border-bottom: 1px solid black; display: inline-block; width: 50px;"></span> </div>	tens	ones	3	2
tens	ones								
tens	ones								
3	2								
<p>13.</p> <table border="1" style="float: right; margin-left: 20px;"> <thead> <tr> <th style="padding: 2px;">tens</th> <th style="padding: 2px;">ones</th> </tr> </thead> <tbody> <tr> <td style="text-align: center; vertical-align: middle;">0</td> <td style="text-align: center; vertical-align: middle;">9</td> </tr> </tbody> </table> <div style="text-align: center; margin-top: 10px;"> <span style="border-bottom: 1px solid black; display: inline-block; width: 50px;"></span> </div>	tens	ones	0	9	<p>14.</p> <table border="1" style="float: right; margin-left: 20px;"> <thead> <tr> <th style="padding: 2px;">tens</th> <th style="padding: 2px;">ones</th> </tr> </thead> <tbody> <tr> <td style="text-align: center; vertical-align: middle;">4</td> <td style="text-align: center; vertical-align: middle;">0</td> </tr> </tbody> </table> <div style="text-align: center; margin-top: 10px;"> <span style="border-bottom: 1px solid black; display: inline-block; width: 50px;"></span> </div>	tens	ones	4	0
tens	ones								
0	9								
tens	ones								
4	0								

15. Choose a number less than 40. Make a math drawing to represent it and fill in the number bond and place value chart.

tens	ones

