




Name _____

Date _____

Write the tens and ones. Then, write an addition sentence to add the tens and ones.

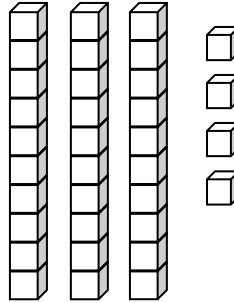
1.



tens	ones

$$\underline{10} + \underline{\quad} = \underline{\quad}$$

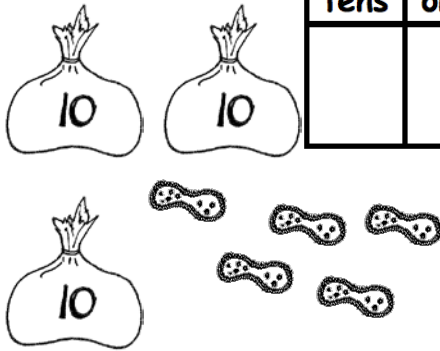
2.



tens	ones

$$\underline{\quad} + \underline{4} = \underline{\quad}$$

3.



tens	ones

$$\underline{\quad} = \underline{30} + \underline{\quad}$$

4.



tens	ones

$$\underline{\quad} = \underline{6} + \underline{\quad}$$