

Name _____

Date _____

Solve. Use simple math drawings to show how to solve with addition and subtraction.
Label the number bond.

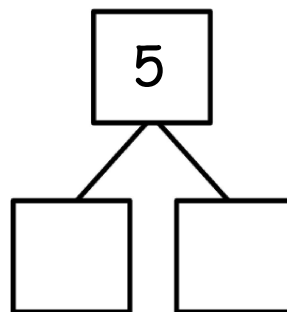
1.

There are 5 apples.

Four are Sam's.

The rest are Jim's.

How many apples does Jim have?



$$\square + \square = 5$$

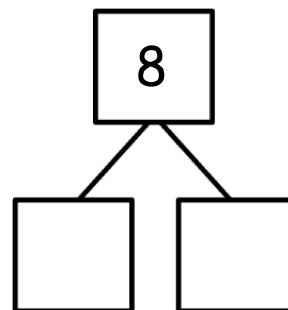
Jim has _____ apple.

$$5 - \square = \square$$

2.

There are 8 mushrooms. Five are black. The rest are white.

How many mushrooms are white?



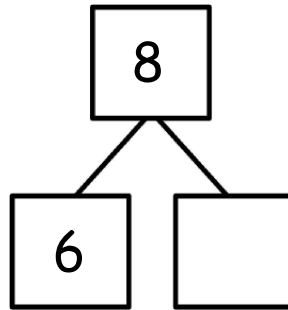
$$\square + \square = 8$$

_____ mushrooms are white.

$$8 - \square = \square$$

Use the number bond to complete the number sentences. Use simple math drawings to tell math stories.

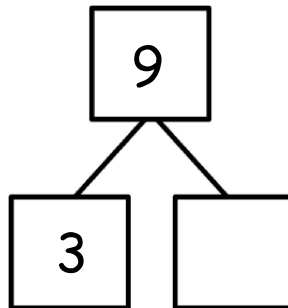
3.



$$\underline{\quad} + \underline{\quad} = 8$$

$$8 - \underline{\quad} = \underline{\quad}$$

4.



$$\underline{\quad} + \underline{\quad} = \underline{\quad}$$

$$\underline{\quad} - \underline{\quad} = \underline{\quad}$$