


Name : \_\_\_\_\_

Score : \_\_\_\_\_

\_\_\_\_\_

Date : \_\_\_\_\_

Find the value of each group of base ten blocks.



= 100




= 10

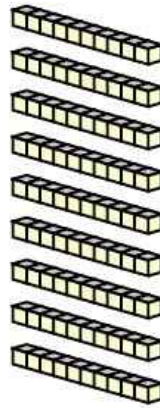


= 1

1)



\_\_\_\_\_ Hundreds




\_\_\_\_\_ Tens



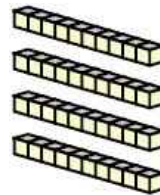
\_\_\_\_\_ Ones

\_\_\_\_\_ Total

2)



\_\_\_\_\_ Hundreds




\_\_\_\_\_ Tens



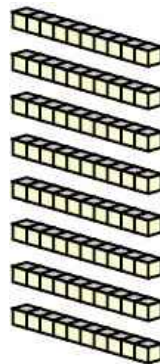
\_\_\_\_\_ Ones

\_\_\_\_\_ Total

3)



\_\_\_\_\_ Hundreds




\_\_\_\_\_ Tens



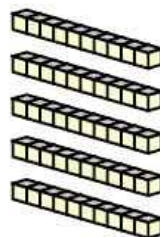
\_\_\_\_\_ Ones

\_\_\_\_\_ Total

4)



\_\_\_\_\_ Hundreds



\_\_\_\_\_ Tens



\_\_\_\_\_ Ones

\_\_\_\_\_ Total

