

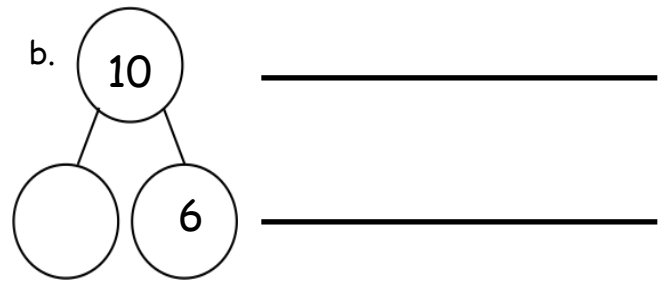
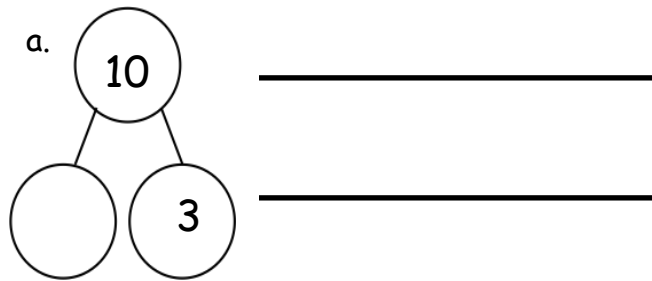
Name _____ Date _____

Use the number path to complete the number bond, and write an addition and a subtraction sentence to match.


1.

Number Path


1	2	3	4	5	6	7	8	9	10
---	---	---	---	---	---	---	---	---	----



2. Solve the number sentences. Pick the best way to solve. Check the box.



Count on



Count back

a. $9 - 7 =$ _____

☐
☐

b. $8 - 2 =$ _____

☐
☐

c. $7 - 5 =$ _____

☐
☐

3. Solve the number sentence. Pick the best way to solve. Use the number path to show why.

Your child might pick a different way to solve. That's okay! We all think differently!

a. $7 - 5 = \underline{2}$

Count on



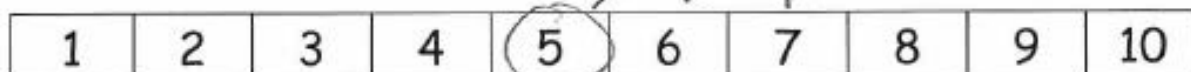
I can count on from 5 to 7...



Count back

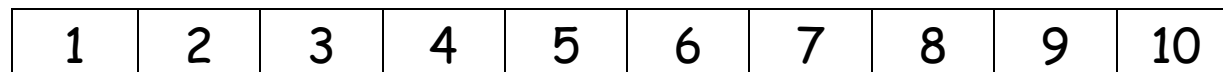


... or I can start at 7 and count back 5 times.



I counted on because it needed fewer hops.

b. $9 - 1 =$



I counted _____ because it needed fewer hops.

c. $10 - 8 =$



Make a math drawing or write a number sentence to show why this is best.