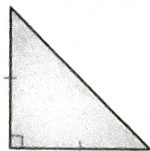


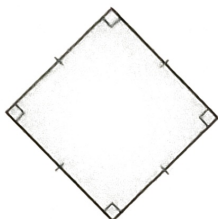
Fill in the bubble completely to show your answer.

12. What type of triangle is shown below? (MACC.5.G.2.3, MACC.5.G.2.4)



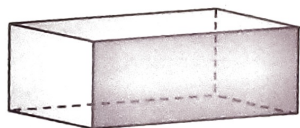
- (A) right isosceles
- (B) right scalene
- (C) equilateral
- (D) obtuse scalene

13. Classify the quadrilateral in as many ways as possible. (MACC.5.G.2.4)



- (A) quadrilateral, parallelogram, rhombus
- (B) quadrilateral, parallelogram, rhombus, trapezoid
- (C) quadrilateral, parallelogram, rhombus, rectangle, trapezoid, square
- (D) quadrilateral, parallelogram, rhombus, rectangle, square

14. Classify the following figure. (MACC.5.MD.3.3)



- (A) cone
- (B) cube
- (C) rectangular prism
- (D) rectangular pyramid