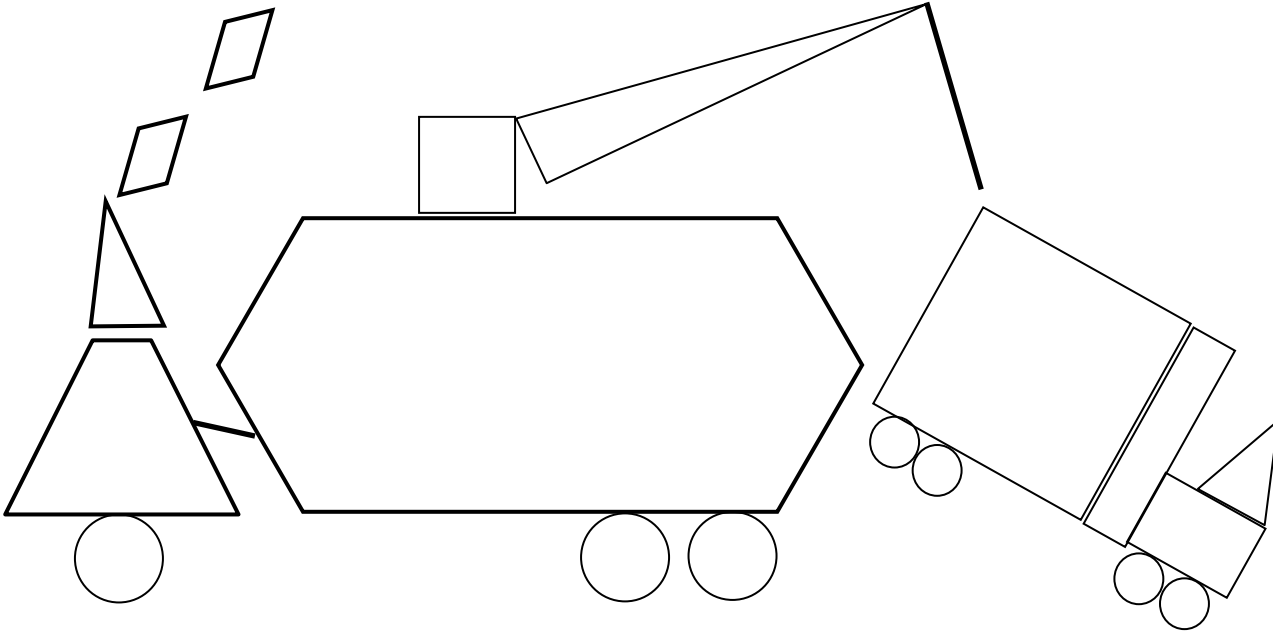


Name \_\_\_\_\_

Date \_\_\_\_\_

1. Use the key to color the shapes. Write how many of each shape are in the picture. Whisper the name of the shape as you work.



a. RED—4-sided shapes: \_\_\_\_\_


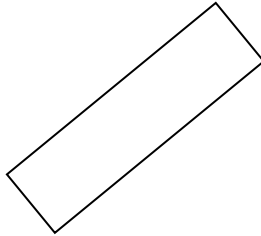
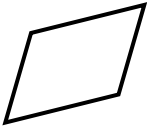
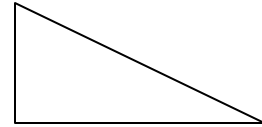


b. GREEN—3-sided shapes: \_\_\_\_\_

c. YELLOW—5-sided shapes: \_\_\_\_\_

d. BLACK—6-sided shapes: \_\_\_\_\_


e. BLUE—shape with 0 corners: \_\_\_\_\_

2. Circle the shapes that are rectangles.



3. Is the shape a rectangle? Explain your thinking.

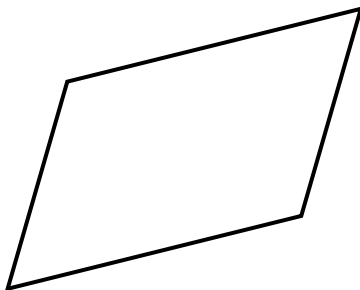
a.




---

---

b.




---

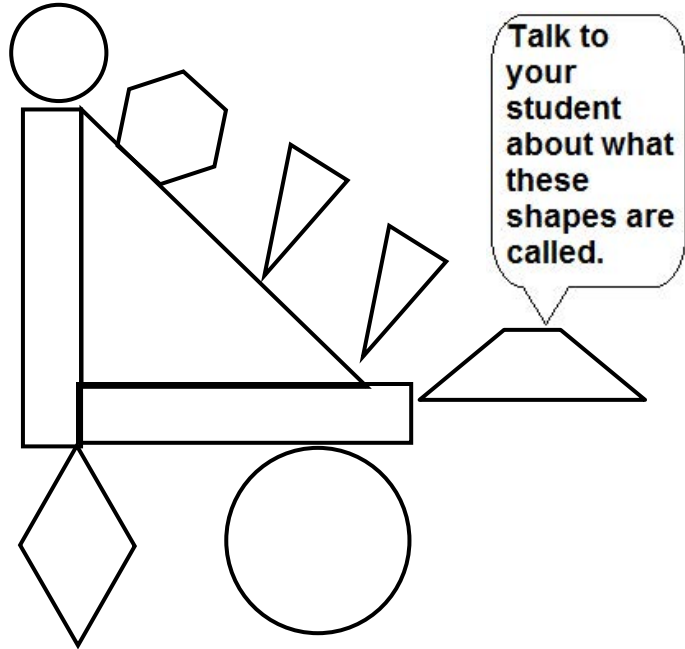
---

Name \_\_\_\_\_

Date \_\_\_\_\_

1. Color the shapes using the key. Write the number of shapes you colored on each line.

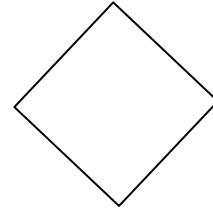

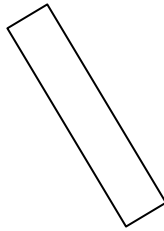


Key	
RED	3 straight sides: _____
BLUE	4 straight sides: _____
GREEN	6 straight sides: _____
YELLOW	1 curved side: _____



- 2.
- A **triangle** has \_\_\_\_\_ straight sides and \_\_\_\_\_ corners.
  - I colored \_\_\_\_\_ triangles.
- 3.
- A **hexagon** has \_\_\_\_\_ straight sides and \_\_\_\_\_ corners.
  - I colored \_\_\_\_\_ hexagon.
- 4.
- A **circle** has \_\_\_\_\_ straight sides and \_\_\_\_\_ corners.
  - I colored \_\_\_\_\_ circles.
- 5.
- A **rhombus** has \_\_\_\_\_ straight sides that are equal in length and \_\_\_\_\_ corners.
  - I colored \_\_\_\_\_ rhombus.

6. A **rectangle** is a closed shape with 4 straight sides and 4 square corners.

a. Cross off the shape that is NOT a rectangle.

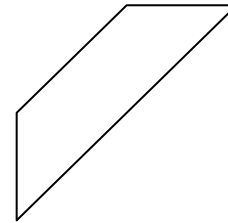
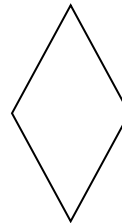




b. Explain your thinking: \_\_\_\_\_

\_\_\_\_\_

7. A **rhombus** is a closed shape with 4 straight sides of the same length.

a. Cross off the shape that is NOT a rhombus.



b. Explain your thinking: \_\_\_\_\_

\_\_\_\_\_



**hexagon**

closed shape with 6  
straight sides

**rectangle**

closed shape with 4  
straight sides and 4  
square corners

**square**

closed shape with 4  
straight sides of the  
same length and 4 square  
corners

**triangle**

closed shape with 3  
straight sides

**rhombus**

closed shape with 4  
straight sides of the  
same length

shape description cards