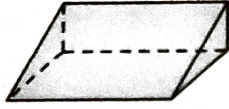


Share and Show

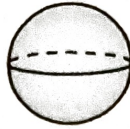


Classify the solid figure. Write *prism*, *pyramid*, *cone*, *cylinder*, or *sphere*.

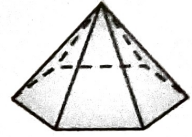
1.



2.

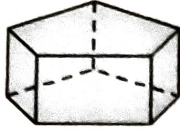


3.




Name the solid figure.

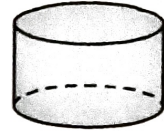
4.



5.



6.





Math Talk

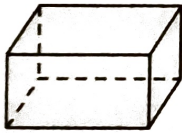
MATHEMATICAL PRACTICES

Compare a prism and a pyramid. Tell how they are similar and how they are different.

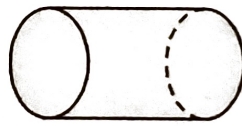
On Your Own

Classify the solid figure. Write *prism*, *pyramid*, *cone*, *cylinder*, or *sphere*.

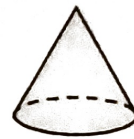
7.



8.




9.

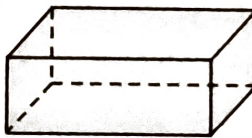


Name the solid figure.

10.



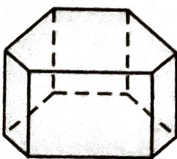
11.



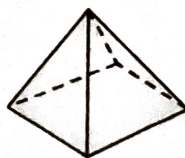
12.



13.



14.



15.

