

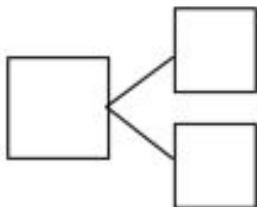
Gr1 Mod1 Topic B Quiz

1. Use the soccer balls to help you write the expressions and number bonds to show 6.



_____ + _____

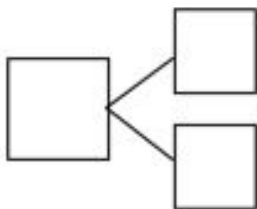
_____ + _____



2. Show another way to make 6.

_____ + _____


_____ + _____



3. Color in two dice that make 7 together. Then, fill in the number bond and number sentences to match the dice you colored.

<div> <div></div> <div>+</div> <div></div> <div>=</div> <div>7</div> </div>	<div> <div>7</div> <div>=</div> <div></div> <div>+</div> <div></div> </div>
<div> <div></div> <div>+</div> <div></div> <div>=</div> <div>7</div> </div>	<div> <div>7</div> <div>=</div> <div></div> <div>+</div> <div></div> </div>

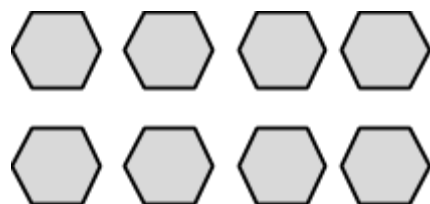
4. Use the domino to help you write the expressions and number bond to show 7.



_____ + _____

_____ + _____

5. Circle 6. How many more does 6 need to make 8? Finish the number bond and write the expressions.




8

_____ + _____

_____ + _____

6. Circle 7. How many more does 7 need to make 9? Finish the number bond and write the expressions.





9


_____ + _____


_____ + _____


7. Color the pairs of numbers that make 9.















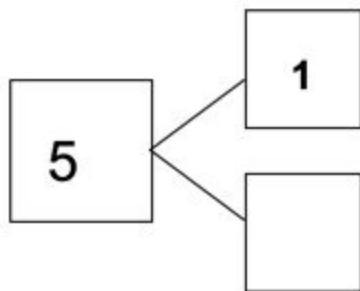
8. There are 10 wagons in the playground. Some are red and some are blue. Show 2 different ways to make 10 using either number bonds or expressions.



--	--

Complete the number bonds to make 5.

9.



10.

