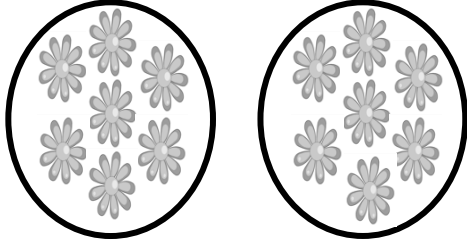




Name \_\_\_\_\_

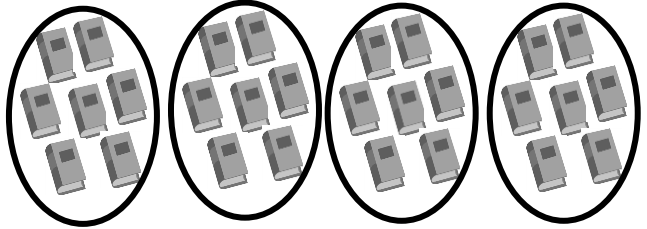
Date \_\_\_\_\_

1.



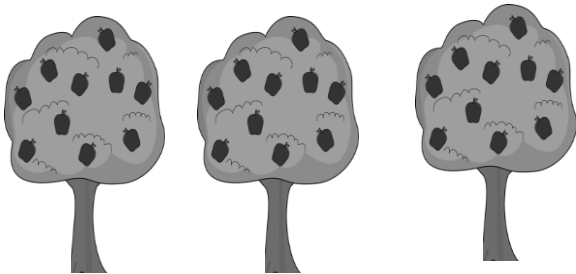
14 flowers are divided into 2 equal groups.  
There are \_\_\_\_\_ flowers in each group.

2.



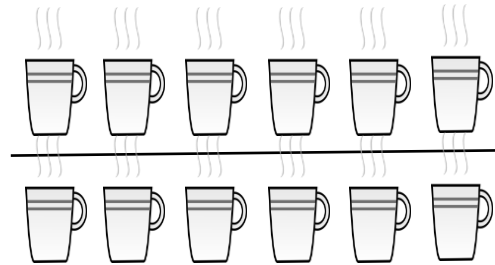
28 books are divided into 4 equal groups.  
There are \_\_\_\_\_ books in each group.

3.




30 apples are divided into \_\_\_\_\_ equal groups.  
There are \_\_\_\_\_ apples in each group.

4.




\_\_\_\_\_ cups are divided into \_\_\_\_\_ equal groups.  
There are \_\_\_\_\_ cups in each group.  
 $12 \div 2 = \underline{\hspace{2cm}}$

5.



There are \_\_\_\_\_ toys in each group.  
 $15 \div 3 = \underline{\hspace{2cm}}$


6.



$9 \div 3 = \underline{\hspace{2cm}}$



7. Audrina has 24 colored pencils. She puts them in 4 equal groups. How many colored pencils are in each group?



There are \_\_\_\_\_ colored pencils in each group.

$24 \div 4 = \underline{\hspace{2cm}}$


8. Charlie picks 20 apples. He divides them equally between 5 baskets. Draw the apples in each basket.



There are \_\_\_\_\_ apples in each basket.

$20 \div \underline{\hspace{2cm}} = \underline{\hspace{2cm}}$

9. Chelsea collects butterfly stickers. The picture shows how she placed them in her book. Write a division sentence to show how she equally grouped her stickers.



There are \_\_\_\_\_ butterflies in each row.

$\underline{\hspace{2cm}} \div \underline{\hspace{2cm}} = \underline{\hspace{2cm}}$