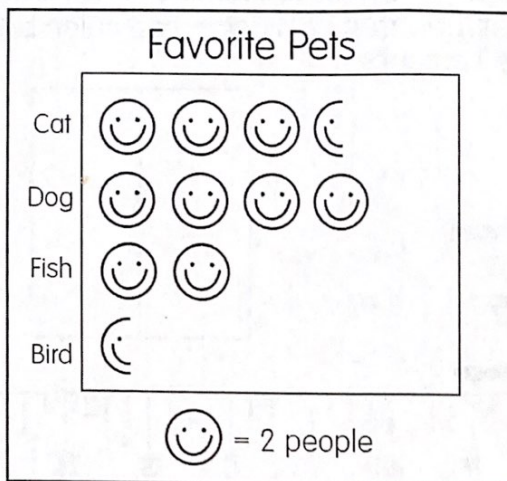


Daily FSA Math Practice

Thursday



How many people said cats were their favorite pets? _____


How many people do not prefer dogs or cats? _____

How many more people prefer dogs than fish and birds together? _____

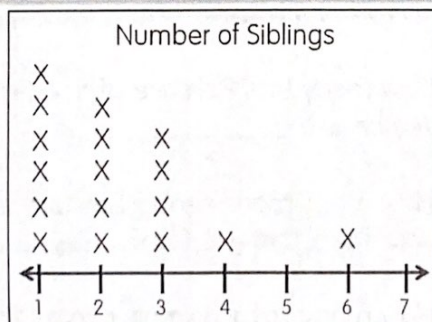
Friday

Use the table below to complete the bar graph.

Treat	\$ Raised
Cookies	\$500
Cakes	\$450
Brownies	\$300
Pies	\$150



Quiz

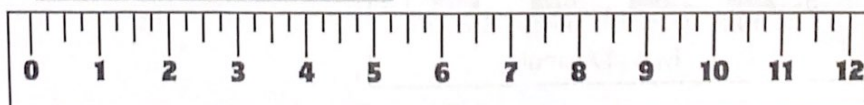


The line plot shows how many siblings each student in a class has.

① How many students have more than 3 siblings? _____

② How many more students have 1 sibling than 3 siblings? _____

③ Measure the length of the line to the nearest quarter inch: _____



MD.2.3

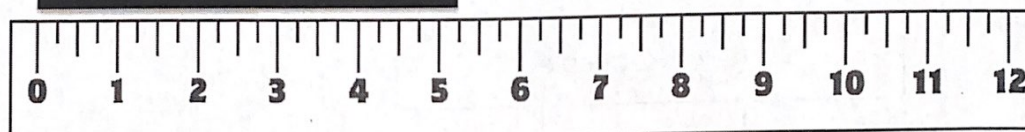

Name: _____ # _____

MD.2.4

Daily FSA Math Practice

Monday


Measure each line to the nearest quarter inch using the ruler below.
Create a tally chart for the measurements.



Tuesday

① Use the data from yesterday's tally chart to create a line plot.

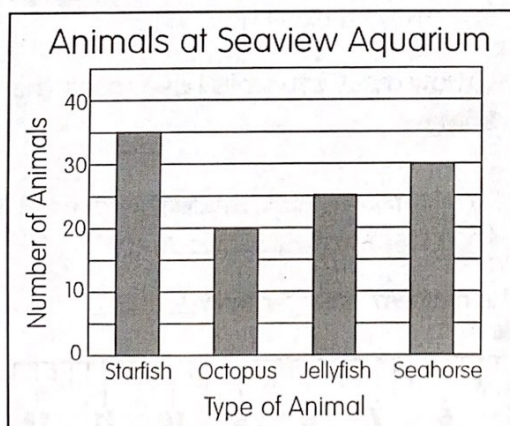
② The graph below shows how many points were scored by a team throughout the season.



How many times did the team score more than 70 points? _____

How many times did the team score less than 60 points? _____

Wednesday



How many starfish are at the Seaview Aquarium? _____

How many more seahorses are at the aquarium than jellyfish? _____

How many total animals are at the Seaview Aquarium? _____