


Cut and paste the letters D-E-C-E-M-B-E-R.

--	--	--	--	--	--	--	--



----- ✂
D E C E M B E R

Addition - Count the objects, write the numbers and find the sum (1-10)



+

=



+

=



+

=



+

=



+

=


Name _____

Date _____

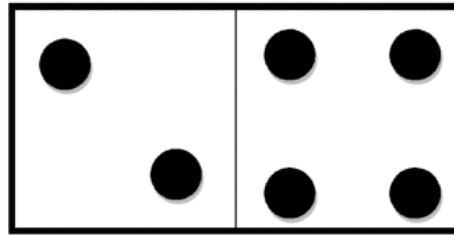


DOMINO ADDITION SHEET 2

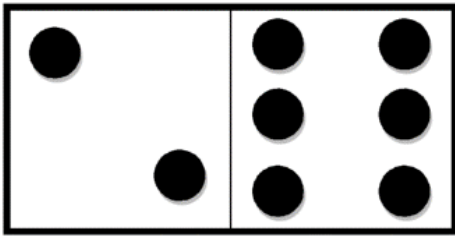
Count the number of dots on each domino and fill in the total.




$$\underline{\quad} + \underline{\quad} = \underline{\quad}$$




$$\underline{\quad} + \underline{\quad} = \underline{\quad}$$




$$\underline{\quad} + \underline{\quad} = \underline{\quad}$$



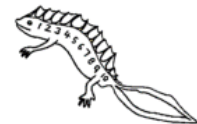
$$\underline{\quad} + \underline{\quad} = \underline{\quad}$$



$$\underline{\quad} + \underline{\quad} = \underline{\quad}$$



$$\underline{\quad} + \underline{\quad} = \underline{\quad}$$



Free Math Sheets, Math Games and Math Help

MATH-SALAMANDERS.COM

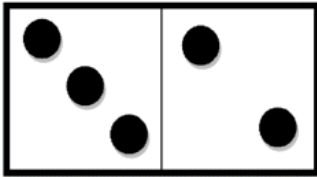
Name _____

Date _____




DOMINO ADDITION SHEET 3


Count the number of dots on each domino and fill in the total.



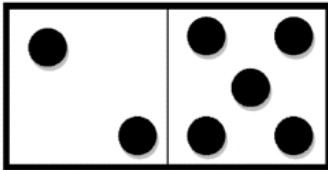
$3 + 2 = \underline{\quad}$



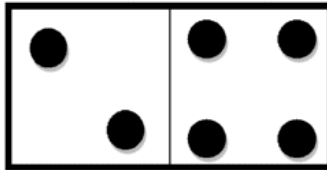
$3 + 4 = \underline{\quad}$




$6 + 4 = \underline{\quad}$




$1 + 5 = \underline{\quad}$




$1 + 4 = \underline{\quad}$




$5 + 4 = \underline{\quad}$



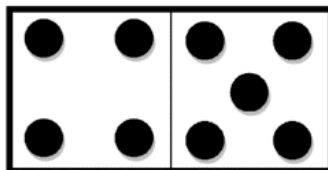
$4 + 4 = \underline{\quad}$



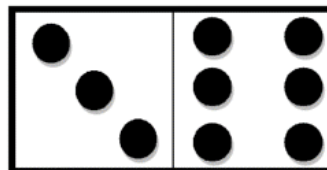
$5 + 6 = \underline{\quad}$



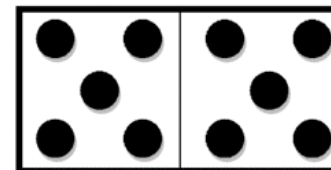
$2 + 5 = \underline{\quad}$



$5 + 5 = \underline{\quad}$



$2 + 6 = \underline{\quad}$




$5 + 5 = \underline{\quad}$




Free Math Sheets, Math Games and Math Help

MATH-SALAMANDERS.COM



Name: _____



1			4	
	7			10
11		13		15
	17		19	
21	22		24	
26		28		

Count to 30

Write each missing number.

1		3		5
6		8		10
11		13		15
16		18		20
21		23		25
26		28		30