



Name _____

Date _____

1. Count on to add.



$$\square + \square = \square$$

There are ____ flowers altogether.


2.



$$\square = \square + \square$$

There are ____ oranges in all.

3.



$$\square = \square + \square$$

There is a total of ____ crayons.



DUVAL COUNTY
PUBLIC SCHOOLS




4. Use your 5-group cards to count on to add. Try to use as few dot cards as you can.

a. $\boxed{6} \bigcirc + \boxed{1} = \boxed{}$

b. $\boxed{6} \bigcirc + \boxed{3} = \boxed{}$

c. $\boxed{7} \bigcirc + \boxed{2} = \boxed{}$

d. $\boxed{} = \boxed{5} \bigcirc + \boxed{3}$



5. Use your 5-group cards, your fingers, or your known facts to count on to add.

a. $\boxed{8} \bigcirc + \boxed{2} = \boxed{}$

b. $\boxed{} = \boxed{4} \bigcirc + \boxed{1}$

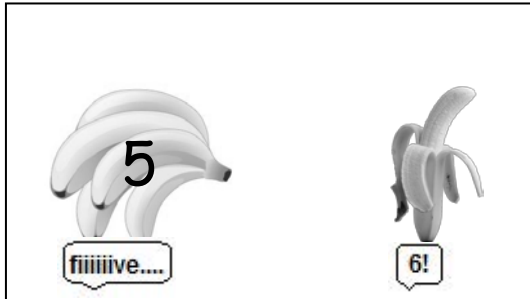
c. $\boxed{4} \bigcirc + \boxed{3} = \boxed{}$

d. $\boxed{} = \boxed{6} \bigcirc + \boxed{3}$

Name _____

Date _____

Count on to add.



a.

$$\boxed{5} + \boxed{1} = \boxed{6}$$



Write what you say
when you count on.



b.

$$\boxed{5} + \boxed{2} = \boxed{}$$



c.

$$\boxed{7} + \boxed{2} = \boxed{}$$



d.

$$\boxed{} = \boxed{6} + \boxed{3}$$



e.

$$\boxed{} = \boxed{7} + \boxed{}$$

