



Name _____

Date _____

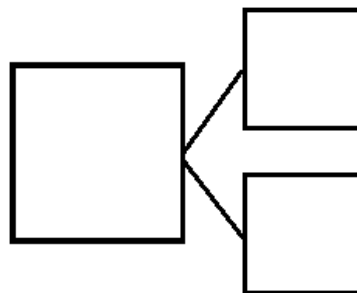
1. Jill was given a total of 5 flowers for her birthday. Draw more flowers in the vase to show Jill's birthday flowers.



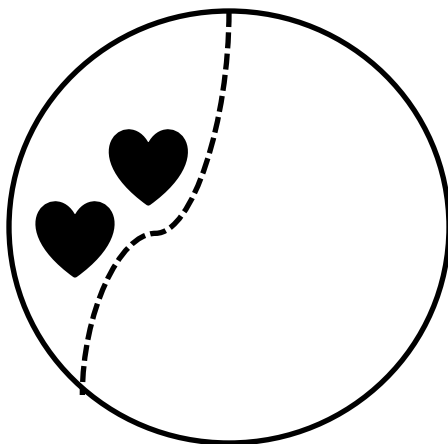
How many flowers did you have to draw? ____ flowers

Write a number sentence and a number bond to match the story.

$$\square = \square + \square$$

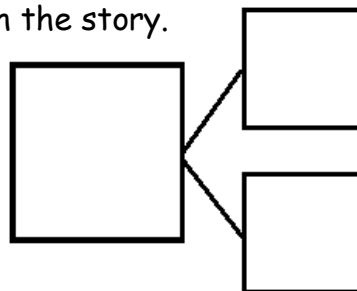


2. Kate and Nana were baking cookies. They made 2 heart cookies and then made some square cookies. They made 8 cookies altogether. How many square cookies did they make? Draw and count on to show the story.

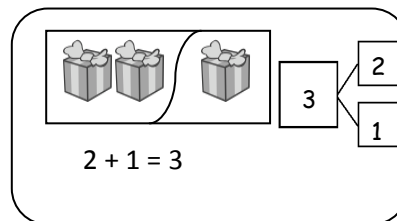


Write a number sentence and a number bond to match the story.

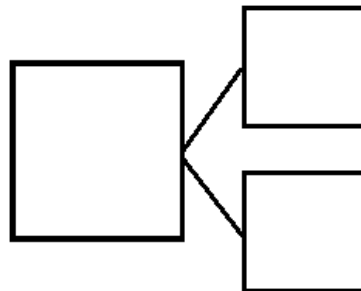

$$\square 2 \quad + \quad \square = \square 8$$



Show the parts. Write a number bond to match the story.



3. Bill has 2 trucks. His friend, James, came over with some more. Together, they had 5 trucks. How many trucks did James bring over?

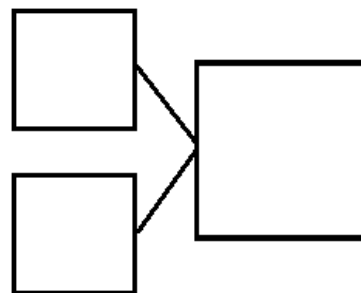
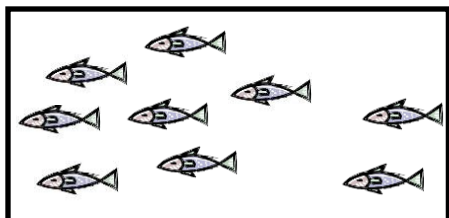


James brought over _____ trucks.

Write a number sentence to explain the story.

$$\boxed{2} + \boxed{} = \boxed{5}$$

4. Jane caught 7 fish before she stopped to eat lunch. After lunch, she caught some more. At the end of the day, she had 9 fish. How many fish did she catch after lunch?



Jane caught _____ fish after lunch.

Write a number sentence to explain the story.

$$\boxed{} + \boxed{} = \boxed{}$$

Name _____

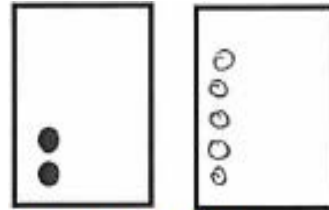
Date _____

1. Use the 5-group cards to count on to find the missing number in the number sentences.

a.

$$\boxed{2} + \boxed{5} = \boxed{7}$$

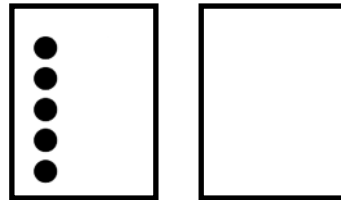
2 plus a mystery
number equals 7!



I can count on like
twooooo.... 3, 4, 5, 6, 7!

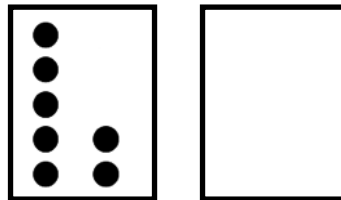
b.

$$\boxed{8} = \boxed{5} + \boxed{}$$



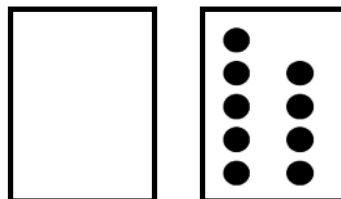
c.

$$\boxed{9} = \boxed{7} + \boxed{}$$



d.

$$\boxed{9} = \boxed{} + \boxed{9}$$



2. Match the number sentence to the math story. Draw a picture or use your 5-group cards to solve.

- a. Scott has 3 cookies. His mom gives him some more. Now, he has 8 cookies. How many cookies did his mom give him?

Scott's mom gave him _____ cookies.

$$\boxed{6} + \boxed{?} = \boxed{9}$$

$$\boxed{3} + \boxed{?} = \boxed{8}$$

- b. Kim sees 6 birds in the tree. Some more birds fly in. Kim sees 9 birds in the tree. How many birds flew to the tree?

_____ birds flew to the tree.

$$\boxed{4} + \boxed{?} = \boxed{8}$$