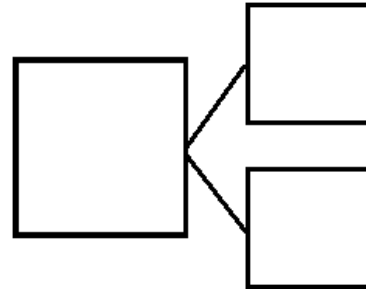





Name _____

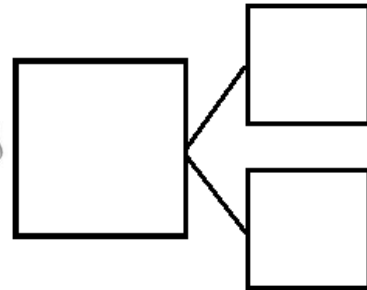

Date _____

1. Use the picture to write the number sentence and the number bond.



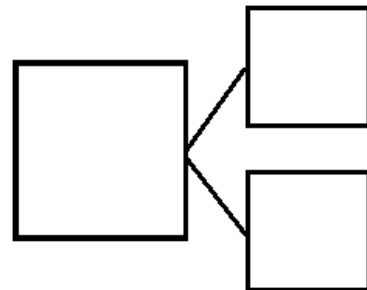

_____ little turtles + _____ big turtles = _____ turtles

2.



_____ dogs that are awake + _____ sleeping dogs = _____ dogs

3.





_____ pigs + _____ pigs in mud = _____ pigs


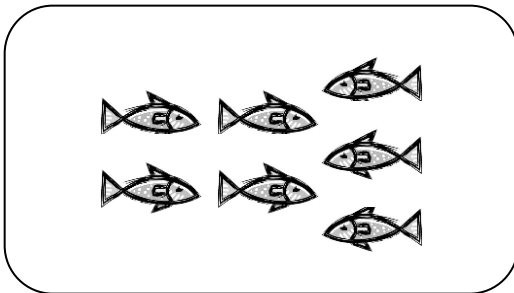


4. Draw a line from the picture to the matching 5-group cards.



a.




b.



c.



d.






Name _____

Date _____

1. Use your 5-group cards to solve.

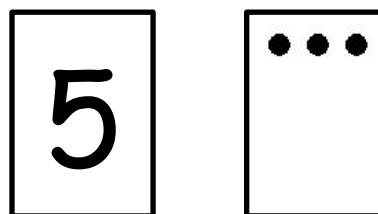


I see 5 little faces and 3 big faces!

$$\boxed{5} + \boxed{3} = \boxed{8}$$


I know 5 and 3 more make 8!

Draw the other 5-group card to show what you did.




I count fiiiive....
6, 7, 8!

2. Use your 5-group cards to solve.



$$\boxed{} = \boxed{} + \boxed{}$$

Draw the other 5-group card to show what you did.



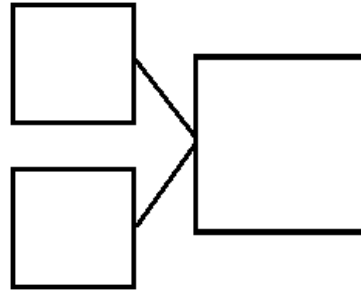
3. There are 4 tall boys and 5 short boys. Draw to show how many boys there are in all.

There are _____ boys in all.

Write a number sentence to show what you did.

$$\square + \square = \square$$

Write a number bond to match the story.



4. There are 3 girls and 5 boys. Draw to show how many children there are altogether.

There are _____ children altogether.

Write a number sentence to show what you did.

$$\square + \square = \square$$

Write a number bond to match the story.

