

1. Which is the shape of a can of soup?

- A. cube
- B. sphere
- C. cylinder
- D. pyramid

2. Which shape has the MOST faces?


- A. Cube
- B. Cylinder
- C. Sphere
- D. Cone

3. Which shape has no edges or corners?

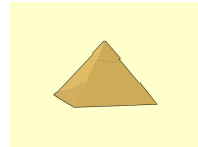
A.



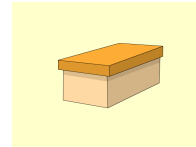
B.



C.




D.




4. Which shape makes up the faces of a cube?


A.




B.



C.



D.



5. Which item is shaped like a rectangular prism?


A.



B.



C.



D.

