

Monday

① To the nearest minute, what time does the clock below show?

- (A) 2:01
- (B) 12:10
- (C) 1:01
- (D) 2:12

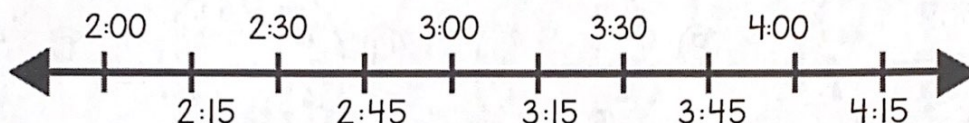


② Brandon starts raking leaves at 3:35. He finishes raking leaves at 4:03. How long does he spend raking leaves?

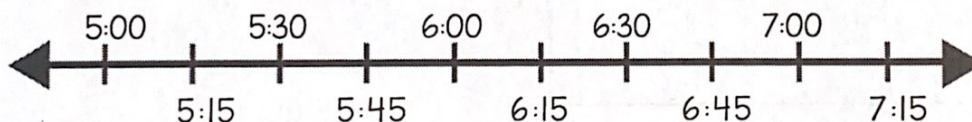
- (A) 25 minutes
- (B) 27 minutes
- (C) 28 minutes
- (D) 30 minutes

Tuesday

① Monica begins cleaning at 2:00. She spends an hour and 15 minutes cleaning. Draw an arrow over the number line to show what time Monica finished cleaning.



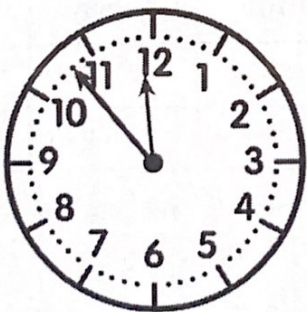
② Chandler left work at 5:30. It took him 45 minutes to drive home. Draw an arrow over the number line to show what time Chandler arrived home.



Wednesday

① To the nearest minute, what time does the clock below show?

- (A) 11:53
- (B) 10:59
- (C) 12:54
- (D) 11:12




② Jeremiah has homework for many subjects each night. The length of time, in minutes, he spends on each subject is shown. He starts his homework at 4:00. Complete the table to show what time he will start and finish each subject.

Subject	Time Spent	Start Time	End Time
Math	15 min	4:00	
Reading	22 min		
Spelling	9 min		

Daily FSA Math Practice

Thursday

① Which clock shows 12:52?

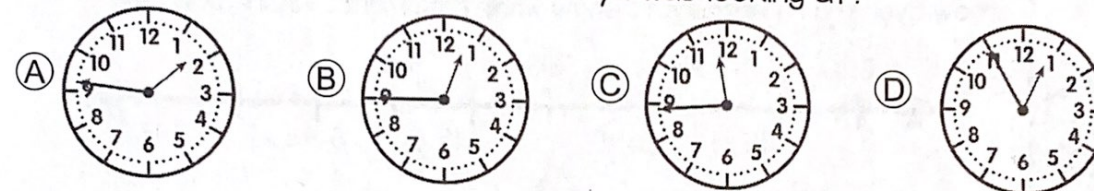


② Edwin has Saturday chores. The length of time, in minutes, she spends on each chore is shown. She starts her chores at 10:00. Complete the table to show what time she will start and finish each chore.

Chore	Time Spent	Start Time	End Time
Sweeping	19 min	10:00	
Dusting	21 min		
Trash	6 min		

Friday

① Arya looks at the clock when she arrived home. The clock read 12:45. Which clock could be the clock that Arya was looking at?



② Xavier started his homework at 2:10. He finished his work at 2:56. How many minutes did Xavier spend on his work?

Quiz

① To the nearest minute, what time does the clock below show?

- (A) 9:00
(B) 8:57
(C) 12:45
(D) 11:43



② Complete the chart.

HW Subject	Time Spent	Start Time	End Time
Math	14 min	7:00	
Reading	26 min		
Spelling	9 min		

② Julio begins his chores at 10:00. He cleans for 75 minutes. Draw an arrow above the number line to show the time he finished cleaning.

