





Name _____

Date _____

For each pair, write the number of items in each set. Then, circle the set with the greater number of items.

<p>1.</p>  <p>_____</p>	<p>2.</p>  <p>_____</p>
<p>3.</p>  <p>_____</p>	<p>4.</p>  <p>_____</p>

5. Circle the number that is *greater* in each pair.

a. 1 ten 2 ones 3 tens 2 ones

b. 2 tens 8 ones 3 tens 2 ones

c. 19 15

d. 31 26

6. Circle the set of coins that has a *greater* value.

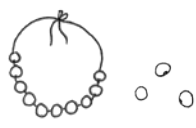
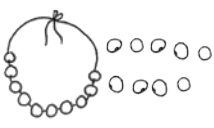
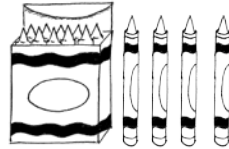
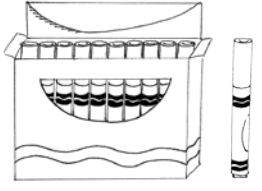



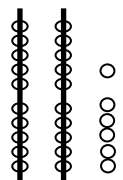


3 dimes



3 pennies

For each pair, write the number of items in each set. Circle the set with *fewer* items.

<p>7.</p> <div style="display: flex; justify-content: space-around; align-items: center;">   </div> <div style="display: flex; justify-content: space-around; margin-top: 20px;"> <div style="border-bottom: 1px solid black; width: 50px;"></div> <div style="border-bottom: 1px solid black; width: 50px;"></div> </div>	<p>8.</p> <div style="display: flex; justify-content: space-around; align-items: center;">   </div> <div style="display: flex; justify-content: space-around; margin-top: 20px;"> <div style="border-bottom: 1px solid black; width: 50px;"></div> <div style="border-bottom: 1px solid black; width: 50px;"></div> </div>
<p>9.</p> <div style="display: flex; justify-content: space-around; align-items: center;">   </div> <div style="display: flex; justify-content: space-around; margin-top: 20px;"> <div style="border-bottom: 1px solid black; width: 50px;"></div> <div style="border-bottom: 1px solid black; width: 50px;"></div> </div>	<p>10.</p> <div style="display: flex; justify-content: space-around; align-items: center;">   </div> <div style="display: flex; justify-content: space-around; margin-top: 20px;"> <div style="border-bottom: 1px solid black; width: 50px;"></div> <div style="border-bottom: 1px solid black; width: 50px;"></div> </div>

11. Circle the number that is *less* in each pair.

- | | | |
|----|---------------|---------------|
| a. | 2 tens 5 ones | 1 ten 5 ones |
| b. | 28 ones | 3 tens 2 ones |
| c. | 18 | 13 |
| d. | 31 | 26 |

12. Circle the set of coins that has *less* value.



13. Circle the amount that is *less*. Draw or write to show how you know.

32	17
----	----