











Name _____

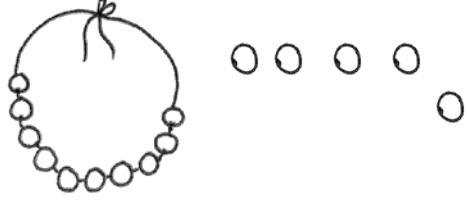







Date _____

Fill in the place value chart and the blanks.

<p>1. </p> <table border="1" style="float: right; margin-left: 20px;"> <thead> <tr> <th style="padding: 5px;">tens</th> <th style="padding: 5px;">ones</th> </tr> </thead> <tbody> <tr> <td style="height: 60px;"></td> <td style="height: 60px;"></td> </tr> </tbody> </table> <p style="text-align: center; margin-top: 20px;">$20 = \underline{\hspace{2cm}} \text{ tens.}$</p>	tens	ones			<p>2. </p> <table border="1" style="float: right; margin-left: 20px;"> <thead> <tr> <th style="padding: 5px;">tens</th> <th style="padding: 5px;">ones</th> </tr> </thead> <tbody> <tr> <td style="height: 60px;"></td> <td style="height: 60px;"></td> </tr> </tbody> </table> <p style="text-align: center; margin-top: 20px;">$14 = \underline{\hspace{2cm}} \text{ ten and } \underline{\hspace{2cm}} \text{ ones.}$</p>	tens	ones		
tens	ones								
tens	ones								
<p>3. </p> <table border="1" style="float: right; margin-left: 20px;"> <thead> <tr> <th style="padding: 5px;">dimes</th> <th style="padding: 5px;">pennies</th> </tr> </thead> <tbody> <tr> <td style="height: 60px;"></td> <td style="height: 60px;"></td> </tr> </tbody> </table> <p style="text-align: center; margin-top: 20px;">$\underline{\hspace{2cm}} = 3 \text{ tens } 5 \text{ ones.}$</p>	dimes	pennies			<p>4. </p> <table border="1" style="float: right; margin-left: 20px;"> <thead> <tr> <th style="padding: 5px;">dimes</th> <th style="padding: 5px;">pennies</th> </tr> </thead> <tbody> <tr> <td style="height: 60px;"></td> <td style="height: 60px;"></td> </tr> </tbody> </table> <p style="text-align: center; margin-top: 20px;">$\underline{\hspace{2cm}} = 2 \text{ tens } 6 \text{ ones.}$</p>	dimes	pennies		
dimes	pennies								
dimes	pennies								
<p>5. </p> <table border="1" style="float: right; margin-left: 20px;"> <thead> <tr> <th style="padding: 5px;">dimes</th> <th style="padding: 5px;">pennies</th> </tr> </thead> <tbody> <tr> <td style="height: 60px;"></td> <td style="height: 60px;"></td> </tr> </tbody> </table> <p style="text-align: center; margin-top: 20px;">$\underline{\hspace{2cm}} = \underline{\hspace{2cm}} \text{ tens } \underline{\hspace{2cm}} \text{ ones.}$</p>	dimes	pennies			<p>6. </p> <table border="1" style="float: right; margin-left: 20px;"> <thead> <tr> <th style="padding: 5px;">dimes</th> <th style="padding: 5px;">pennies</th> </tr> </thead> <tbody> <tr> <td style="height: 60px;"></td> <td style="height: 60px;"></td> </tr> </tbody> </table> <p style="text-align: center; margin-top: 20px;">$\underline{\hspace{2cm}} = \underline{\hspace{2cm}} \text{ tens } \underline{\hspace{2cm}} \text{ ones.}$</p>	dimes	pennies		
dimes	pennies								
dimes	pennies								
<p>7. </p> <table border="1" style="float: right; margin-left: 20px;"> <thead> <tr> <th style="padding: 5px;">tens</th> <th style="padding: 5px;">ones</th> </tr> </thead> <tbody> <tr> <td style="height: 60px;"></td> <td style="height: 60px;"></td> </tr> </tbody> </table> <p style="text-align: center; margin-top: 20px;">$\underline{\hspace{2cm}} = \underline{\hspace{2cm}} \text{ tens } \underline{\hspace{2cm}} \text{ ones.}$</p>	tens	ones			<p>8. </p> <table border="1" style="float: right; margin-left: 20px;"> <thead> <tr> <th style="padding: 5px;">tens</th> <th style="padding: 5px;">ones</th> </tr> </thead> <tbody> <tr> <td style="height: 60px;"></td> <td style="height: 60px;"></td> </tr> </tbody> </table> <p style="text-align: center; margin-top: 20px;">$\underline{\hspace{2cm}} \text{ tens } \underline{\hspace{2cm}} \text{ ones} = \underline{\hspace{2cm}}.$</p>	tens	ones		
tens	ones								
tens	ones								

10 more than 25 is 35

Fill in the blank. Draw or cross off tens or ones as needed.

<p>9.</p>  <p>1 more than 15 is _____.</p>	<p>10.</p>  <p>10 more than 5 is _____.</p>
<p>11.</p>  <p>10 more than 30 is _____.</p>	<p>12.</p>  <p>1 more than 30 is _____.</p>
<p>13.</p>  <p>1 less than 24 is _____.</p>	<p>14.</p>  <p>10 less than 24 is _____.</p>
<p>15.</p>  <p>10 less than 21 is _____.</p>	<p>16.</p>  <p>1 less than 21 is _____.</p>