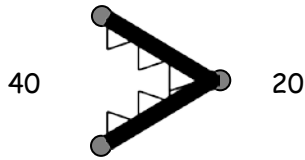


Name \_\_\_\_\_

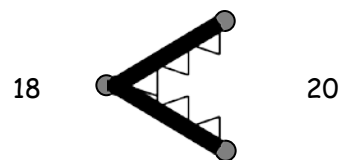
Date \_\_\_\_\_

1. Use the symbols to compare the numbers. Fill in the blank with  $<$ ,  $>$ , or  $=$  to make a true number sentence. Read the number sentences from left to right.



$$40 > 20$$

40 is greater than 20.



$$18 < 20$$

18 is less than 20.

a. $27 \bigcirc 24$	b. $31 \bigcirc 28$	c. $10 \bigcirc 13$
d. $13 \bigcirc 15$	e. $31 \bigcirc 29$	f. $38 \bigcirc 18$
g. $27 \bigcirc 17$	h. $32 \bigcirc 21$	i. $12 \bigcirc 21$



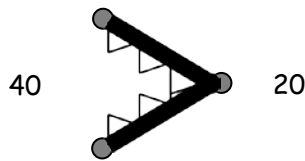
2. Circle the correct words to make the sentence true. Use  $>$ ,  $<$ , or  $=$  and numbers to write a true number sentence. The first one is done for you.

<p>a.</p> <div><div>36</div><div><div>is greater than</div><div>is less than</div><div>is equal to</div></div><div>3 tens 6 ones</div></div> <p><u>36</u> <math>=</math> <u>36</u></p>	<p>b.</p> <div><div>1 ten 4 ones</div><div><div>is greater than</div><div>is less than</div><div>is equal to</div></div><div>17</div></div> <p><u>          </u> <math>\bigcirc</math> <u>          </u></p>
<p>c.</p> <div><div>2 tens 4 ones</div><div><div>is greater than</div><div>is less than</div><div>is equal to</div></div><div>34</div></div> <p><u>          </u> <math>\bigcirc</math> <u>          </u></p>	<p>d.</p> <div><div>20</div><div><div>is greater than</div><div>is less than</div><div>is equal to</div></div><div>2 tens 0 ones</div></div> <p><u>          </u> <math>\bigcirc</math> <u>          </u></p>
<p>e.</p> <div><div>31</div><div><div>is greater than</div><div>is less than</div><div>is equal to</div></div><div>13</div></div> <p><u>          </u> <math>\bigcirc</math> <u>          </u></p>	<p>f.</p> <div><div>12</div><div><div>is greater than</div><div>is less than</div><div>is equal to</div></div><div>21</div></div> <p><u>          </u> <math>\bigcirc</math> <u>          </u></p>
<p>g.</p> <div><div>17</div><div><div>is greater than</div><div>is less than</div><div>is equal to</div></div><div>3 ones 1 ten</div></div> <p><u>          </u> <math>\bigcirc</math> <u>          </u></p>	<p>h.</p> <div><div>30</div><div><div>is greater than</div><div>is less than</div><div>is equal to</div></div><div>0 tens 30 ones</div></div> <p><u>          </u> <math>\bigcirc</math> <u>          </u></p>

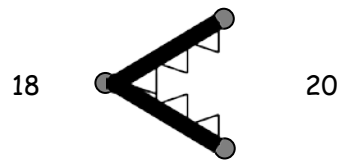
Name \_\_\_\_\_

Date \_\_\_\_\_

1. Use the symbols to compare the numbers. Fill in the blank with  $<$ ,  $>$ , or  $=$  to make a true number sentence. Complete the number sentence with a phrase from the word bank.



40  $>$  20  
40 is greater than 20.



18  $<$  20  
18 is less than 20.

Word Bank

is greater than  
is less than  
is equal to

a. 17  $>$  13

17 is greater than 13

b. 23  $\bigcirc$  33

23 \_\_\_\_\_ 33

c. 36  $\bigcirc$  36

36 \_\_\_\_\_ 36

d. 25  $\bigcirc$  32

25 \_\_\_\_\_ 32

e. 38  $\bigcirc$  28

38 \_\_\_\_\_ 28

f. 32  $\bigcirc$  23

32 \_\_\_\_\_ 23



g. 1 ten 5 ones  14

1 ten 5 ones \_\_\_\_\_ 14

h. 3 tens  30

3 tens \_\_\_\_\_ 30

i. 29  2 tens 7 ones

29 \_\_\_\_\_ 2 tens 7 ones

j. 19  2 tens 3 ones

19 \_\_\_\_\_ 2 tens 3 ones

k. 3 tens 1 one  13

3 tens 1 one \_\_\_\_\_ 13

l. 35  3 tens 5 ones

35 \_\_\_\_\_ 3 tens 5 ones

m. 2 tens 3 ones  32

2 tens 3 ones \_\_\_\_\_ 32

n. 3 tens  36

3 tens \_\_\_\_\_ 36

o. 29  3 tens 9 ones

29 \_\_\_\_\_ 3 tens 9 ones

p. 4 tens  39

4 tens \_\_\_\_\_ 39