




















Name: \_\_\_\_\_

### Time Worksheet

#### Match analog and digital clocks

Which time matches? Mark with X in the box of the correct clock.

1.		<input type="checkbox"/> 	<input type="checkbox"/> 	<input type="checkbox"/> 
2.		<input type="checkbox"/> 	<input type="checkbox"/> 	<input type="checkbox"/> 
3.		<input type="checkbox"/> 	<input type="checkbox"/> 	<input type="checkbox"/> 
4.		<input type="checkbox"/> 	<input type="checkbox"/> 	<input type="checkbox"/> 
5.		<input type="checkbox"/> 	<input type="checkbox"/> 	<input type="checkbox"/> 