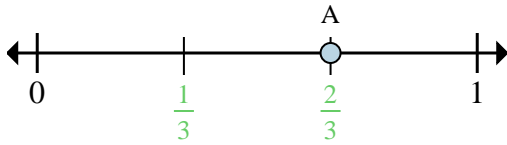


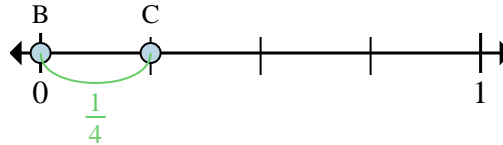


Solve each problem.



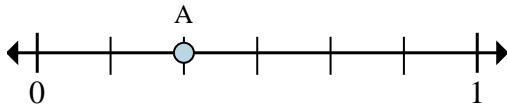
Ex) This numberline is divided into how many pieces?

Ex) What is the location of A (written as a fraction)?



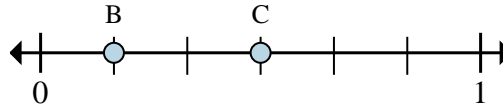
Ex) On this numberline what is the value of 0 written as a fraction?

Ex) On this numberline from B to C is how far (written as a fraction)?



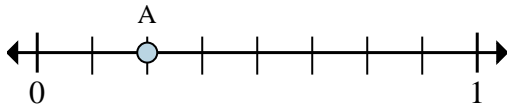
1a) This numberline is divided into how many pieces?

1b) What is the location of A (written as a fraction)?



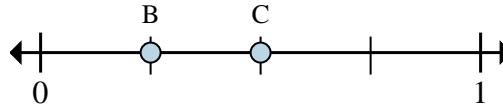
2a) On this numberline what is the value of 0 written as a fraction?

2b) On this numberline from B to C is how far (written as a fraction)?



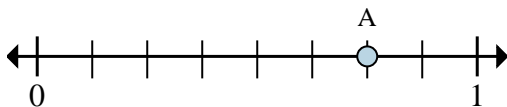
3a) This numberline is divided into how many pieces?

3b) What is the location of A (written as a fraction)?



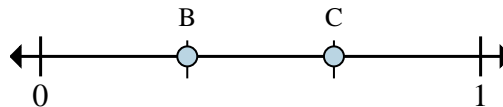
4a) On this numberline what is the value of 1 written as a fraction?

4b) On this numberline from B to C is how far (written as a fraction)?



5a) This numberline is divided into how many pieces?

5b) What is the location of A (written as a fraction)?



6a) On this numberline what is the value of 1 written as a fraction?

6b) On this numberline from B to C is how far (written as a fraction)?

AnswersEx. 3Ex. $\frac{2}{3}$ Ex. $\frac{0}{4}$ Ex. $\frac{1}{4}$

1a. _____

1b. _____

2a. _____

2b. _____

3a. _____

3b. _____

4a. _____

4b. _____

5a. _____

5b. _____

6a. _____

6b. _____