

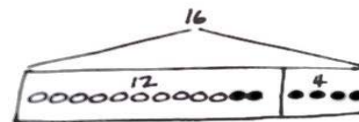
Name _____

Date _____

Read the word problem.

Draw a tape diagram and label.

Write a number sentence and a statement that matches the story.



1. Rose drew 7 pictures, and Willie drew 11 pictures. How many pictures did they draw all together?

They drew _____ pictures.

2. Darnel walked 7 minutes to Lee's house. Then, he walked to the park. Darnel walked for a total of 18 minutes. How many minutes did it take Darnel to get to the park?

It took Darnel _____ minutes to get to the park.

3. Emi has some goldfish. Tamra has 14 betta fish. Tamra and Emi have 19 fish in all. How many goldfish does Emi have?

Emi has _____ goldfish.

4. Shanika built a block tower using 14 blocks. Then, she added 4 more blocks to the tower. How many blocks are there in the tower now?

The tower is made of _____ blocks.

5. Nikil's tower is 15 blocks tall. He added some more blocks to his tower. His tower is 18 blocks tall now. How many blocks did Nikil add?

Nikil added _____ blocks.

6. Ben and Peter caught 17 tadpoles. They gave some to Anton. They have 4 tadpoles left. How many tadpoles did they give to Anton?

They gave Anton _____ tadpoles.



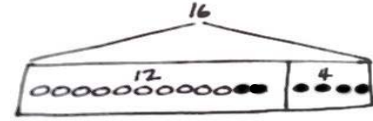
Name _____

Date _____

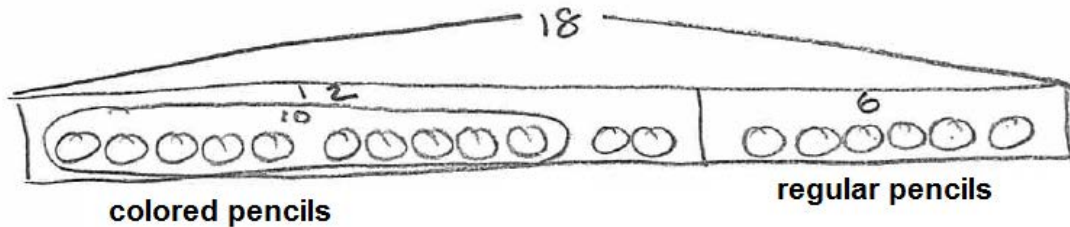
Read the word problem.

Draw a tape diagram and label.

Write a number sentence and a statement that matches the story.



1. Fatima has 12 ^{part} colored pencils in her bag. She has 6 ^{part} regular pencils, too. How many pencils does Fatima have?



Fatima has 18 pencils.

2. Julio swam 7 laps in the morning. In the afternoon, he swam some more laps. He swam a total of 14 laps. How many laps did he swim in the afternoon?

Julio swam _____ laps in the afternoon.

3. Peter built 18 models. He built 13 airplanes and some cars. How many car models did he build?

Peter built _____ car models.

4. Kiana found some shells at the beach. She gave 8 shells to her brother. Now, she has 9 shells left. How many shells did Kiana find at the beach?

Kiana found _____ shells.