

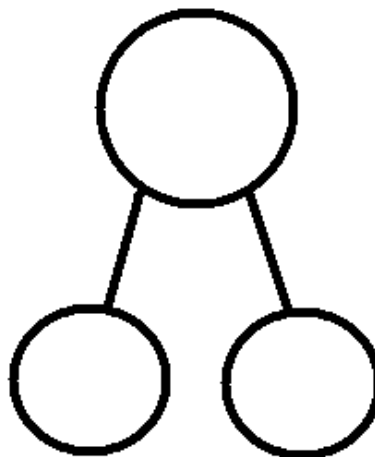


Name _____

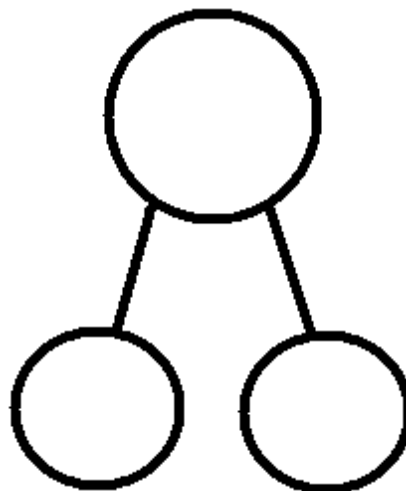
Date _____

With a partner, create a story for each of the number sentences below. Draw a picture to show. Write the number bond to match the story.

1. $6 + 2 = \square$

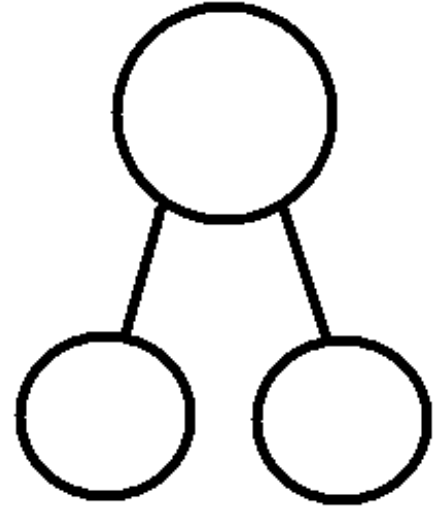


2. $5 + 5 = \square$





3. $5 + \square = 7$



4. $6 + \square = 10$

