

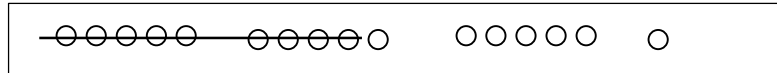


Name _____

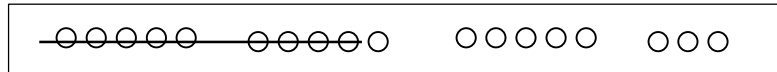
Date _____

1. Match the pictures with the number sentences.

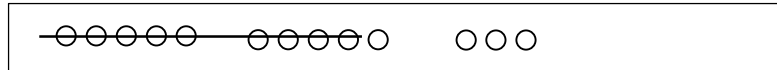
a. $13 - 9 = 4$



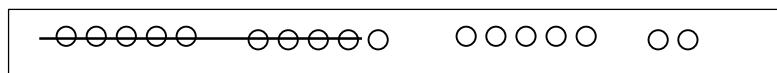
b. $14 - 9 = 5$



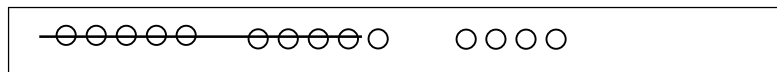
c. $17 - 9 = 8$



d. $18 - 9 = 9$



e. $16 - 9 = 7$



Draw 5-group rows. Visualize and then cross out to solve. Complete the number sentences.

2. $11 - 9 = \underline{\quad}$

3. $13 - 9 = \underline{\quad}$

4. $16 - 9 = \underline{\quad}$

5. $17 - 9 = \underline{\quad}$



6. $14 - 9 = \underline{\quad}$

7. $13 - 9 = \underline{\quad}$

8. $12 - 9 = \underline{\quad}$

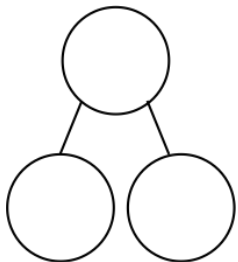
9. $15 - 9 = \underline{\quad}$

10. Show making 10 and taking from 10 to complete the two number sentences.

a. $5 + 9 = \underline{\quad}$

b. $14 - 9 = \underline{\quad}$


11. Make a number bond for Problem 10. Write two additional number sentences that use this number bond.



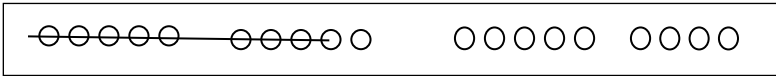
Name _____

Date _____

Write the number sentence for each 5-group row drawing.

1.  13 - 9 = 4

 _____

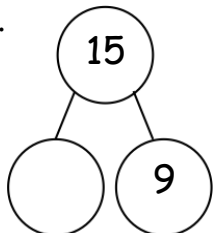

 _____

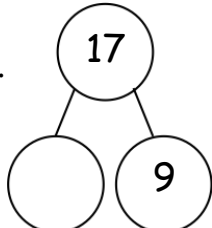
 _____

 _____

 _____

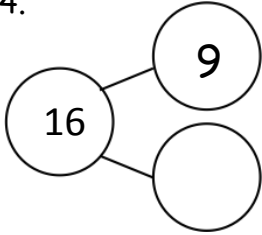
Draw 5-groups to complete the number bond and write the -9 number sentence.

2.  

3. 

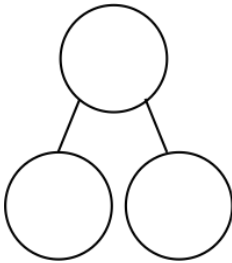


4.



Draw 5-groups to show making ten and taking from ten to solve the two number sentences. Make a number bond and write two additional number sentences that would have this number bond.

5. $8 + 9 = \underline{\quad}$



6. $17 - 9 = \underline{\quad}$

