
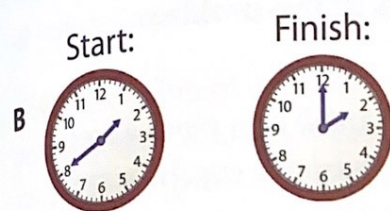
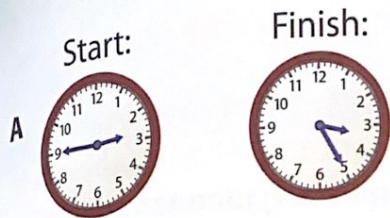


- 4 Joe spent 40 minutes reading a magazine. Which pairs of clocks show possible times that he started and finished reading the magazine? Circle the letter for all that apply.



- 5 Mariah played two games of checkers with her brother. The first game took 12 minutes and the second game took 18 minutes. They put the game away at 7:55. What time did they start playing checkers?

Show your work.

Answer They started playing checkers at _____.

- 6 Jamal started writing thank-you notes at 5:25. It took him 20 minutes to write them. He also spent some time writing addresses on the envelopes. He finished at 6:00. How long did it take Jamal to write the addresses?

Show your work.

Answer It took Jamal _____ minutes to write the addresses.

Self Check Go back and see what you can check off on the Self Check on page 211.

Practice Solving Problems About Liquid Volume

Solve the problems.

- 1 The pot below contains 1 liter of water.



Which is the best estimate for how much water the pot could hold?

- A 2 liters
 - B 5 liters
 - C 10 liters
 - D 20 liters
- 2 Noah used 8 liters of water to water 4 flower beds. He used the same amount of water on each bed. He used all of the water. How much water did he use on each flower bed?
- A 2 liters
 - B 6 liters
 - C 12 liters
 - D 32 liters
- 3 Susan buys 10 liters of drinking water. If she drinks 1 liter each day, how much water will she have left after one week?

Solution _____

4 Choose all the containers that hold no more than 1 liter.

- A** kitchen sink
- B** tube of toothpaste
- C** baby food jar
- D** bathtub
- E** paper cup

5 Molly filled a tub for her dog using a 4-liter bucket. She filled the bucket 6 times. How much water did Molly use to wash her dog?

Show your work.

Answer _____ liters



Go back and see what you can check off on the Self Check on page 211.

Practice Solving Word Problems About Mass

Solve the problems.

1 Which is the best estimate for the mass of a watermelon?

- A 30 kilograms
- B 3 kilograms
- C 30 grams
- D 3 grams

2 Which objects have a mass of about 1 gram? Circle the letter for all that apply.

- A rubber band
- B box of crayons
- C pair of scissors
- D dollar bill
- E library book

3 Mrs. Martin is grocery shopping. Before picking up potatoes, her shopping bag has a mass of 4 kilograms. Then she adds some potatoes to her bag. The scale shows the mass of the potatoes. What is the mass of the bag, in kilograms, after adding the potatoes?



Solution _____