

Name : _____

Score : _____

Measuring Objects - Whole Inches

Type 2: 52

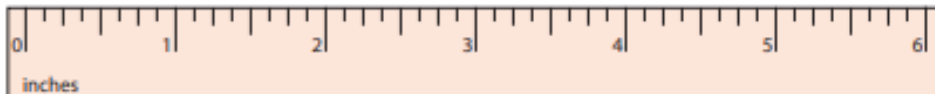
Measure each object to the nearest inches.

1)



- A. 5 inches** **B. 2 inches** **C. 1 inch**

2)



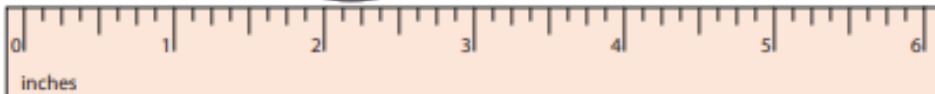
- A. 4 inches** **B. 3 inches** **C. 6 inches**

3)



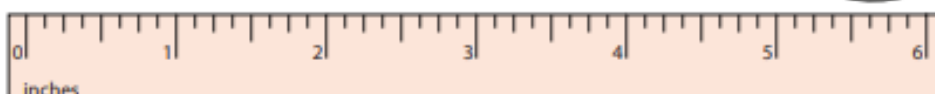
- A. 2 inches** **B. 3 inches** **C. 4 inches**

4)



- A. 5 inches** **B. 4 inches** **C. 6 inches**

5)



- A. 2 inches** **B. 3 inches** **C. 6 inches**