

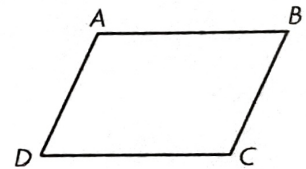
Name _____



Share and Show



1. Use quadrilateral $ABCD$ to answer each question. Complete the sentence.

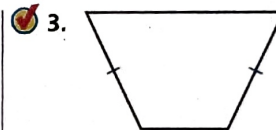
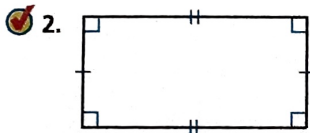


- Measure the sides. Are any of the sides congruent? _____
Mark any congruent sides.
- How many right angles, if any, does the quadrilateral have? _____
- How many pairs of parallel sides, if any, does the quadrilateral have? _____

So, quadrilateral $ABCD$ is a _____.



Classify the quadrilateral in as many ways as possible. Write *quadrilateral, parallelogram, rectangle, rhombus, square, or trapezoid*.



Math Talk

MATHEMATICAL PRACTICES

Can the parallel sides of a trapezoid be the same length? Explain your answer.



On Your Own

Classify the quadrilateral in as many ways as possible. Write *quadrilateral, parallelogram, rectangle, rhombus, square, or trapezoid*.

