


Name : _____

Counting Coins

Count the coins and write the total amount.

1)  \$ _____

- A. 97 cents B. 90 cents C. 85 cents D. 82 cents

2)  \$ _____

- A. 35 cents B. 60 cents C. 55 cents D. 70 cents

3)  \$ _____

- A. 55 cents B. 50 cents C. 85 cents D. 65 cents

4)  \$ _____


- A. 42 cents B. 50 cents C. 52 cents D. 62 cents

5)  \$ _____

- A. 43 cents B. 63 cents C. 38 cents D. 18 cents


Show a way to make the following amounts

6.

	
_____ quarters	_____ quarters
_____ dimes	_____ dimes
_____ nickels	_____ nickels
_____ pennies	_____ pennies


- A. 2 quarters, 1 dime
- B. 2 quarters, 1 nickel, 4 pennies
- C. 5 dimes, 4 pennies
- D. 8 nickels, 1 dime, 10 pennies

7.

	
____ quarters	____ quarters
____ dimes	____ dimes
____ nickels	____ nickels
____ pennies	____ pennies

- A. 1 quarter, 1 dime, 5 nickels
- B. 3 dimes, 2 nickels
- C. 37 pennies
- D. 2 dimes, 2 nickels, 8 pennies

8.

	
____ quarters	____ quarters
____ dimes	____ dimes
____ nickels	____ nickels
____ pennies	____ pennies

- A. 3 quarters, 1 nickel, 2 dimes
- B. 9 dimes, 2 nickels
- C. 10 nickels, 4 dimes, 8 pennies
- D. 2 quarters, 3 dimes, 2 nickels, 5 pennies