




Name _____

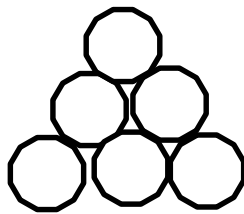
Date _____

Draw and circle to show how you made ten to help you solve the problem.

1. Maria has 9 snowballs and Tony has 6. How many snowballs do they have in all?



Maria



Tony

9 and _____ make _____

10 and _____ make _____

Maria and Tony have _____ snowballs in all.

2. Bob has 9 raisins and Jonny has 4. How many raisins do they have altogether?

$$9 + \underline{\quad} = \underline{\quad}$$

$$10 + \underline{\quad} = \underline{\quad}$$

Bob and Jonny have _____ raisins altogether.



3. There are 3 chairs on the left side of the classroom and 9 on the right side. How many total chairs are in the classroom?

$$9 + \underline{\quad} = \underline{\quad}$$

$$10 + \underline{\quad} = \underline{\quad}$$

There are total chairs.

4. There are 7 children sitting on the rug and 9 children standing. How many children are there in all?

$$9 + \underline{\quad} = \underline{\quad}$$

$$10 + \underline{\quad} = \underline{\quad}$$

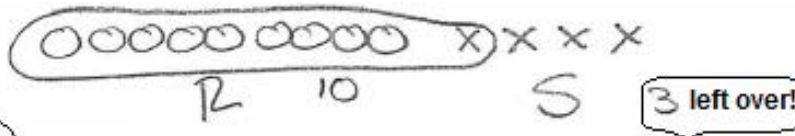
There are children in all.

Name _____

Date _____

Draw, label, and circle to show how you made ten to help you solve.
Complete the number sentences.

1. Ron has 9 marbles and Sue has 4 marbles.
How many marbles do they have in all?



Helping your child make a 10 will help him or her add quickly later. Most adults do this mentally without even thinking about it! 😊

9 and 4 make 13

10 and 3 make 13

Ron and Sue have 13 marbles.

2. Jim has 5 cars and Tina has 9. How many cars do they have altogether?

9 and _____ make _____

10 and _____ make _____

Jim and Tina have ____ cars.

3. Stan has 6 fish and Meg has 9. How many fish do they have in all?

$$9 + \underline{\quad} = \underline{\quad}$$

$$10 + \underline{\quad} = \underline{\quad}$$

Stan and Meg have fish.

4. Rick made 7 cookies and Mom made 9. How many cookies did Rick and Mom make?

$$9 + \underline{\quad} = \underline{\quad}$$

$$10 + \underline{\quad} = \underline{\quad}$$

Rick and Mom made cookies.

5. Dad has 8 pens and Tony has 9. How many pens do Dad and Tony have in all?

$$9 + \underline{\quad} = \underline{\quad}$$

$$10 + \underline{\quad} = \underline{\quad}$$

Dad and Tony have pens.