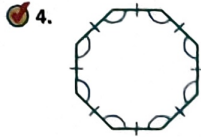
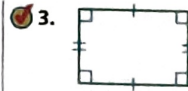



Name _____



Name each polygon. Then tell whether it is a *regular polygon* or *not a regular polygon*.



Math Talk MATHEMATICAL PRACTICES Explain why all regular pentagons have the same shape.



On Your Own.....

Name each polygon. Then tell whether it is a *regular polygon* or *not a regular polygon*.

