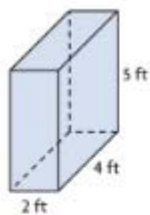


Name _____

Share and Show 

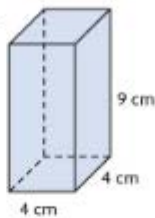
Find the volume.

1.



$$V = \underline{\hspace{2cm}}$$

2.

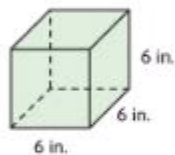


$$V = \underline{\hspace{2cm}}$$

On Your Own

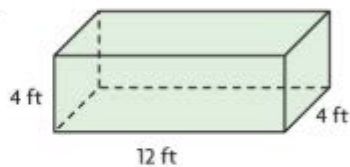
Find the volume.

3.



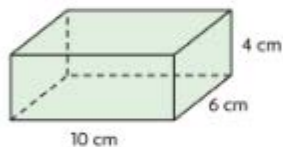
$$V = \underline{\hspace{2cm}}$$

4.



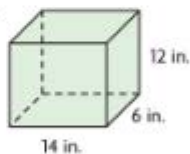
$$V = \underline{\hspace{2cm}}$$

5.



$$V = \underline{\hspace{2cm}}$$

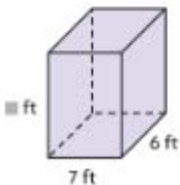
6.



$$V = \underline{\hspace{2cm}}$$

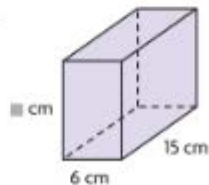
H.O.T. Algebra Find the unknown measurement.

7.



$$V = 420 \text{ cu ft } \square = \underline{\hspace{2cm}} \text{ ft}$$

8.



$$V = 900 \text{ cu cm } \square = \underline{\hspace{2cm}} \text{ cm}$$